

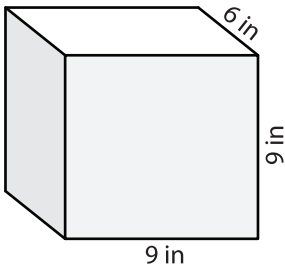
Name: \_\_\_\_\_

## Volume - Prism

Mixed Review: L1ES2

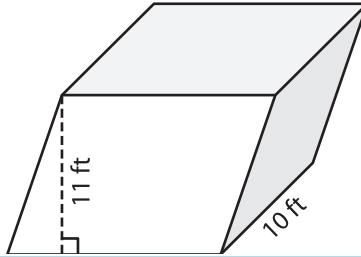
Find the volume of each shape.

1)

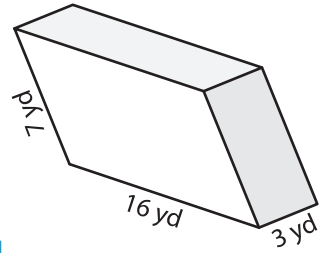


Volume = \_\_\_\_\_

2)

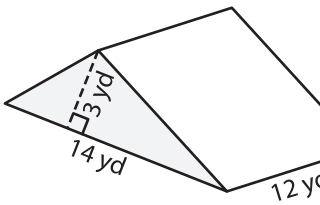


3)



Volume = \_\_\_\_\_

4)



Volume = \_\_\_\_\_

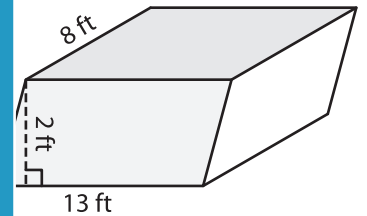
**PREVIEW**

Gain complete access to the largest collection of worksheets in all subjects!

Members, please log in to download this worksheet.

Not a member? Please sign up to gain complete access.

[www.mathworksheets4kids.com](http://www.mathworksheets4kids.com)



Volume = \_\_\_\_\_

7) The base of a prism is a triangle with a base of 14 yd and a height of 3 yd. The length of the prism is 12 yd. Find the volume of the prism if its length is 12 yd.

8) The base of a prism is a triangle with a base of 13 ft and a height of 2 ft. The length of the prism is 8 ft. Find the volume of the prism if its length is 8 ft. Determine the volume of the prism if its length is 8 ft.

\_\_\_\_\_

8) The base of a prism is a parallelogram whose base and height are 13 inches and 5 inches respectively. Find the volume of the prism if its length is 3 inches.

\_\_\_\_\_