

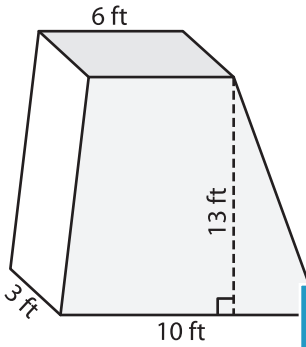
Name: \_\_\_\_\_

## Volume - Prism

Mixed Review: L1ES3

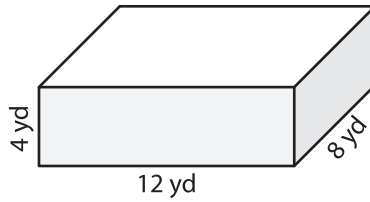
Find the volume of each shape.

1)

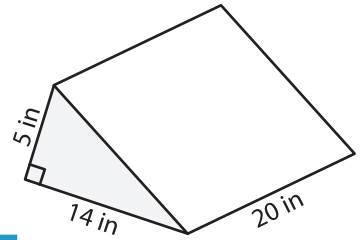


Volume = \_\_\_\_\_

2)

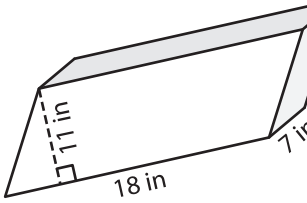


3)



Volume = \_\_\_\_\_

4)



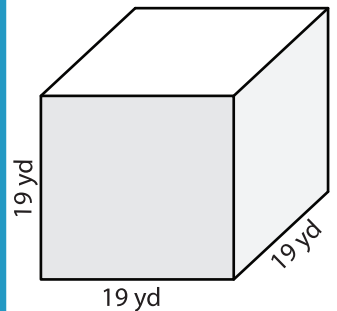
Volume = \_\_\_\_\_

Gain complete access to the largest collection of worksheets in all subjects!

Members, please log in to download this worksheet.

Not a member? Please sign up to gain complete access.

[www.mathworksheets4kids.com](http://www.mathworksheets4kids.com)



Volume = \_\_\_\_\_

7) The base of a prism is a trapezoid with parallel sides of 15 yards and 14 yards. If the height of the trapezoid measure

\_\_\_\_\_ of the trapezoid measure

8) A rectangular prism has a length of 10 feet, a width of 7 feet and a height of 17 feet. What is the volume of the prism?