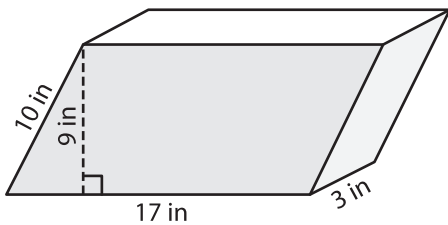


Name : \_\_\_\_\_

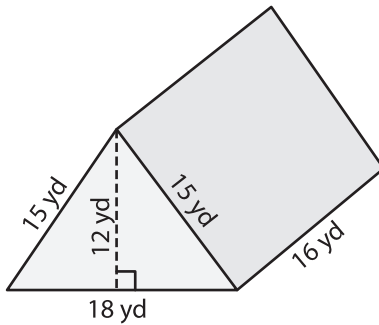
# Surface Area of Prisms & Cylinders

Find the surface area of each shape. (use  $\pi = 3.14$ )

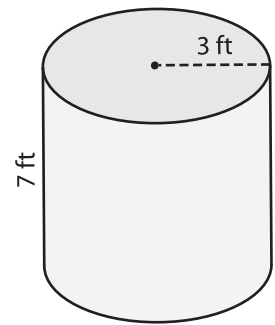
1)



2)



3)



Surface Area = \_\_\_\_\_

Surface Area = \_\_\_\_\_

**PREVIEW**

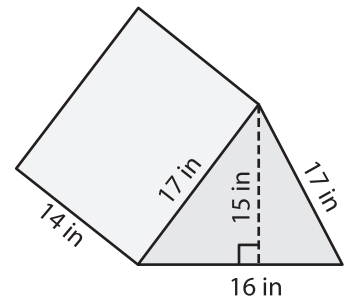
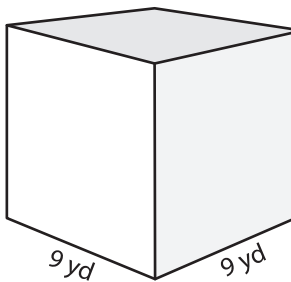
Gain complete access to the largest collection of worksheets in all subjects!

Members, please log in to download this worksheet.

Not a member? Please sign up to gain complete access.

[www.mathworksheets4kids.com](http://www.mathworksheets4kids.com)

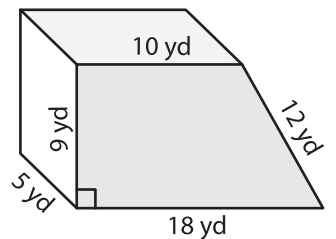
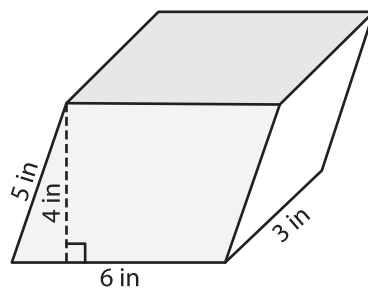
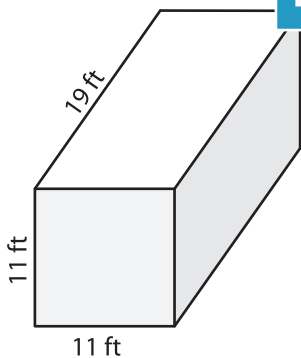
4)



Surface Area = \_\_\_\_\_

Surface Area = \_\_\_\_\_

7)



Surface Area = \_\_\_\_\_

Surface Area = \_\_\_\_\_

Surface Area = \_\_\_\_\_