

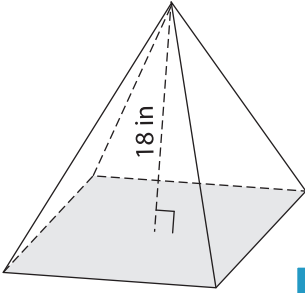
Name : _____

Integers: S1

Volume - Rectangular Pyramid

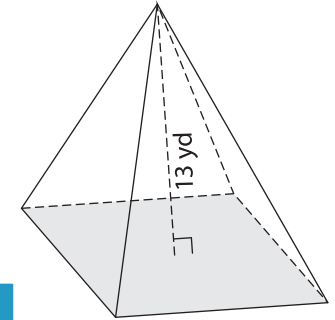
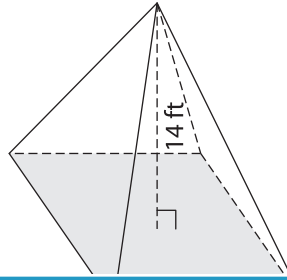
Find the volume of each rectangular pyramid. Round your answer to two decimal places.

1) Base area = 80 in^2



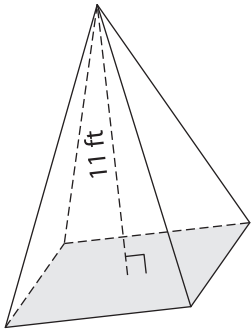
Volume = _____

2) Base area = 63 ft^2



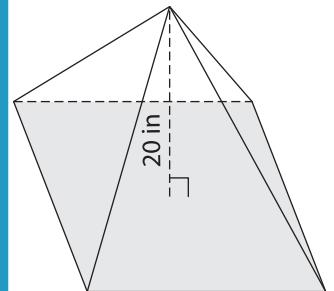
Volume = _____

4) Base area = 18 ft^2



Volume = _____

Base area = 192 in^2



Volume = _____

7) The base area of a rectangular pyramid is 120 ft^2 .

Find its volume if its height is 15 feet.

PREVIEW

Gain complete access to the largest collection of worksheets in all subjects!

Members, please log in to download this worksheet.

Not a member? Please sign up to gain complete access.

www.mathworksheets4kids.com

8) Find the volume of the rectangular pyramid with a base area of 96 square yards and a height of 12 yards.