

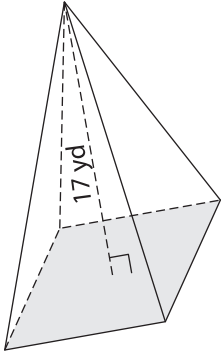
Name : _____

Integers: S3

Volume - Rectangular Pyramid

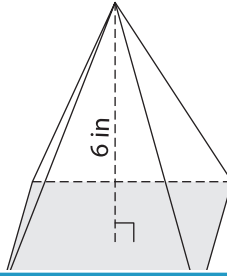
Find the volume of each rectangular pyramid. Round your answer to two decimal places.

1) Base area = 44 yd^2

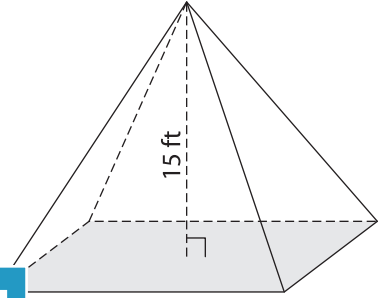


Volume = _____

2) Base area = 15 in^2

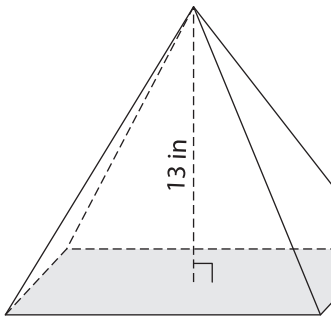


3) Base area = 27 ft^2



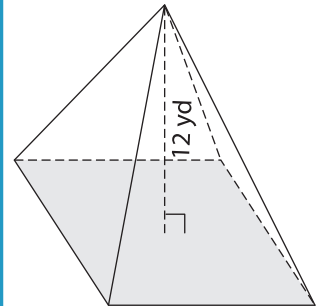
Volume = _____

4) Base area = 92 in^2



Volume = _____

Base area = 258 yd^2



Volume = _____

7) Find the volume of the re

ches and a height of 9 inches.

PREVIEW

Gain complete access to the largest
collection of worksheets in all subjects!

Members, please
log in to
download this
worksheet.

Not a member?
Please sign up to
gain complete
access.

www.mathworksheets4kids.com

8) A rectangular pyramid has a height of 10 feet and a base with area of 323 square feet. What is its volume? Round your answer to two decimal places.