

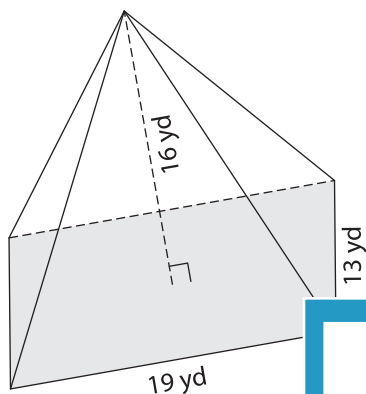
Name : \_\_\_\_\_

## Volume - Rectangular Pyramid

ES3

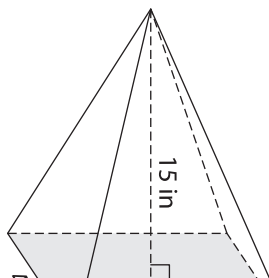
A) Find the volume of each rectangular pyramid. Round your answer to two decimal places.

1)

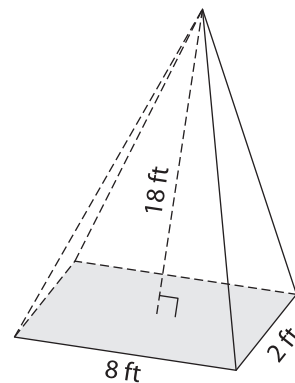


Volume = \_\_\_\_\_

2)



3)



Volume = \_\_\_\_\_

B) Find the volume of each rectangular pyramid. Round your answer to two decimal places.

4) height = 3 yd ; length = 12 yd ; width = 8 yd

Volume = \_\_\_\_\_

6) width = 10 ft ; height = 7 ft ; length = 15 ft

Volume = \_\_\_\_\_

**PREVIEW**  
Gain complete access to the largest collection of worksheets in all subjects!

Members, please log in to download this worksheet.

Not a member? Please sign up to gain complete access.

[www.mathworksheets4kids.com](http://www.mathworksheets4kids.com)

5) length = 5 in ; height = 8 in ; width = 3 in

Volume = \_\_\_\_\_

7) height = 18 yd ; length = 20 yd ; width = 10 yd

Volume = \_\_\_\_\_

8) The length, width and height of a rectangular pyramid are 16 inches, 1 inch and 11 inches respectively. What is its volume? Round your answer to two decimal places.

\_\_\_\_\_