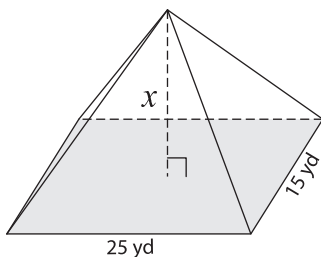


Volume - Rectangular Pyramid

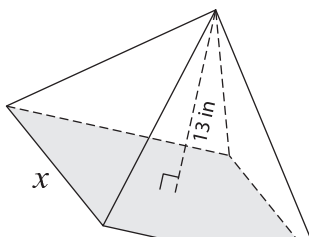
Find the value of x .

1) Volume = $2,125 \text{ yd}^3$

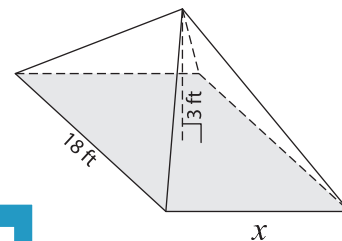


$x =$ _____

2) Volume = 624 in^3

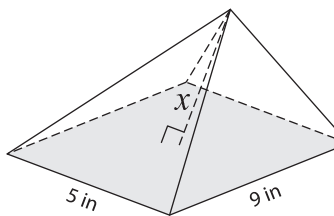


3) Volume = 180 ft^3



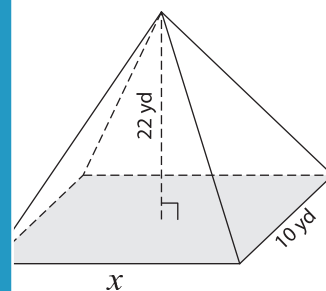
$x =$ _____

4) Volume = 30 in^3



$x =$ _____

Volume = $1,760 \text{ yd}^3$



$x =$ _____

7) The width and height of the pyramid are x and x yards respectively. If the volume of the pyramid is $1,000 \text{ yd}^3$, find the value of x .

_____ yards respectively.

PREVIEW

Gain complete access to the largest collection of worksheets in all subjects!

Members, please log in to download this worksheet.

Not a member? Please sign up to gain complete access.

www.mathworksheets4kids.com

8) A rectangular pyramid has a length of 8 inches and a height of 11 inches. Find the width of the rectangular pyramid whose volume is 88 cubic inches.