

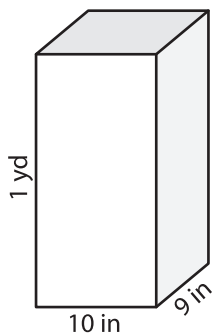
Name : _____

Volume - Rectangular Prism

Sheet 1

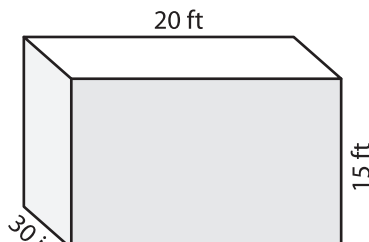
A) Find the volume of each rectangular prism.

1)



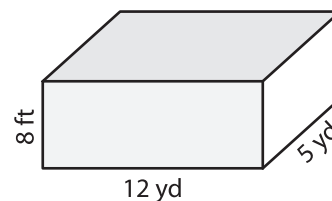
Volume = _____

2)



Volume = _____

3)



Volume = _____ yd³

B) Find the volume of each rectangular prism.

4) height = 6 yd ; length = 10 yd ; width = 4 yd

Volume = _____

6) width = 3 in ; height = 4 in ; length = 10 in

Volume = _____ in³

PREVIEW
Gain complete access to the largest collection of worksheets in all subjects!

Members, please log in to download this worksheet.

Not a member? Please sign up to gain complete access.

www.mathworksheets4kids.com

Volume = _____ yd³

8) The length, width and height of a rectangular prism are 16 feet, 7 feet and 27 inches respectively. What is its volume in cubic feet?
