

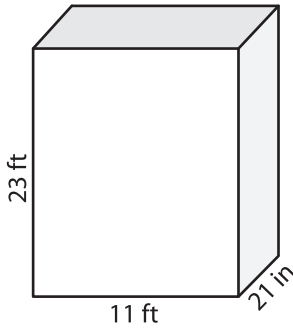
Name : _____

Volume - Rectangular Prism

Sheet 2

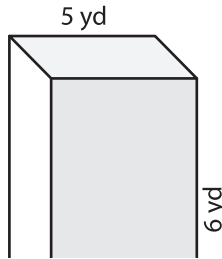
A) Find the volume of each rectangular prism.

1)



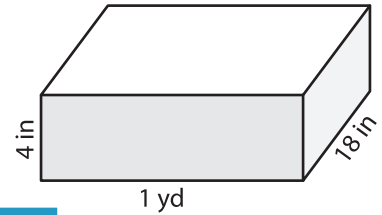
Volume = _____

2)



Volume = _____

3)



Volume = _____ in³

B) Find the volume of each rectangular prism.

4) length = 2 ft ; width = 12 ft ; height = 3 ft

Volume = _____

6) height = 10 yd ; length = 12 yd ; width = 8 yd

Volume = _____ yd³

PREVIEW
Gain complete access to the largest collection of worksheets in all subjects!

Members, please log in to download this worksheet.

Not a member? Please sign up to gain complete access.

www.mathworksheets4kids.com

Volume = _____ ft³

Volume = _____ yd³ ; length = 16 ft ; width = 6 yd

Volume = _____ ft³

Volume = _____ yd³ ; length = 22 ft ; width = 17 ft

Volume = _____ ft³

8) A rectangular prism has a length of 3 yards, a width of 19 inches and a height of 15 inches. What is the volume of the prism in cubic inches?
