

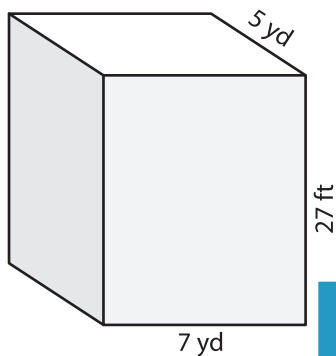
Name : _____

Volume - Rectangular Prism

Sheet 3

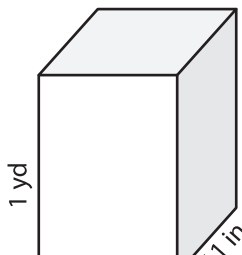
A) Find the volume of each rectangular prism.

1)

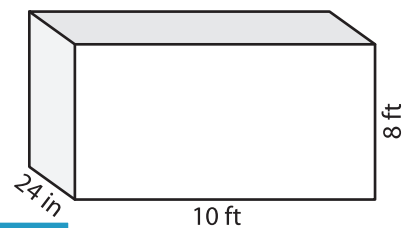


Volume = _____

2)



3)



Volume = _____ ft^3

B) Find the volume of each rectangular prism.

4) width = 18 yd ; length = 2 yd ; height = 1 yd

Volume = _____

6) length = 19 ft ; width = 14 ft ; height = 10 ft

Volume = _____ ft^3

Gain complete access to the largest collection of worksheets in all subjects!

Members, please log in to download this worksheet.

Not a member? Please sign up to gain complete access.

www.mathworksheets4kids.com

Volume = _____ yd^3

8) The length, width and height of a rectangular prism are 17 yards, 9 inches and 13 yards respectively. What is its volume in cubic yards?
