

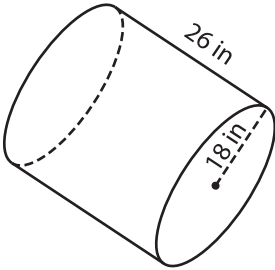
Name : \_\_\_\_\_

# Surface Area - Cylinder

MS2

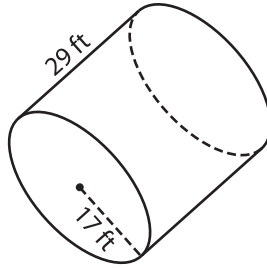
Find the surface area of each cylinder. (use  $\pi = 3.14$ )

1)



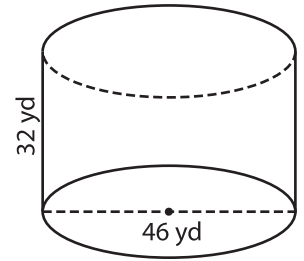
Surface Area = \_\_\_\_\_

2)

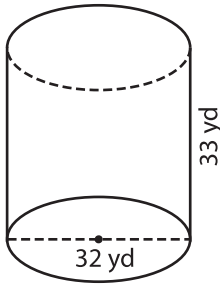


face Area = \_\_\_\_\_

3)



4)



Surface Area = \_\_\_\_\_

**PREVIEW**  
Gain complete access to the largest collection of worksheets in all subjects!

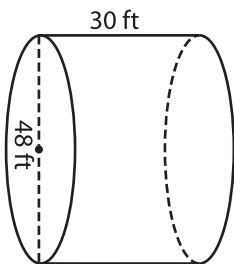
Members, please log in to download this worksheet.

Not a member? Please sign up to gain complete access.

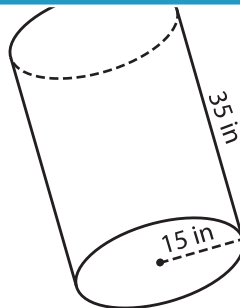
[www.mathworksheets4kids.com](http://www.mathworksheets4kids.com)

face Area = \_\_\_\_\_

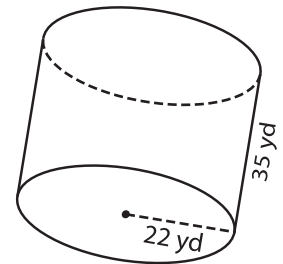
7)



Surface Area = \_\_\_\_\_



Surface Area = \_\_\_\_\_



Surface Area = \_\_\_\_\_