

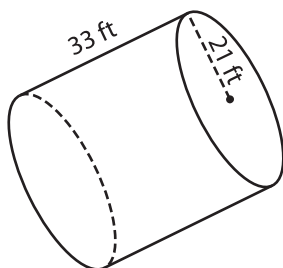
Name : \_\_\_\_\_

## Surface Area - Cylinder

MS3

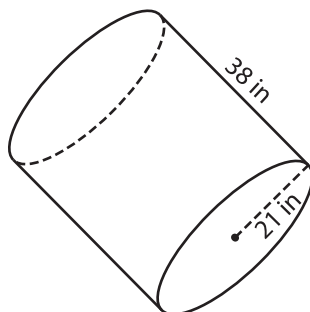
Find the surface area of each cylinder. (use  $\pi = 3.14$ )

1)

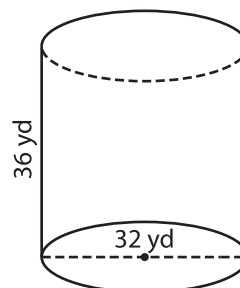


Surface Area = \_\_\_\_\_

2)

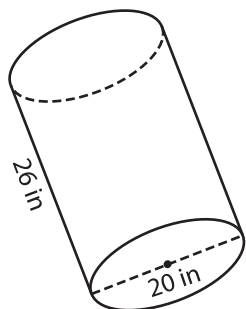


3)



face Area = \_\_\_\_\_

4)



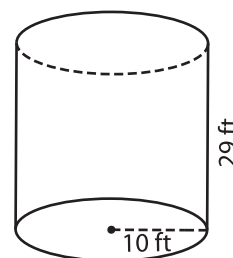
Surface Area = \_\_\_\_\_

**PREVIEW**  
Gain complete access to the largest  
collection of worksheets in all subjects!

Members, please  
log in to  
download this  
worksheet.

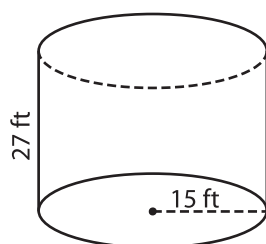
Not a member?  
Please sign up to  
gain complete  
access.

[www.mathworksheets4kids.com](http://www.mathworksheets4kids.com)

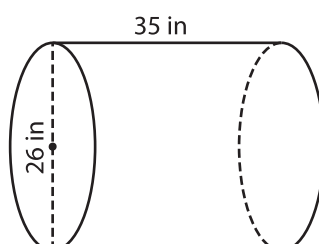


face Area = \_\_\_\_\_

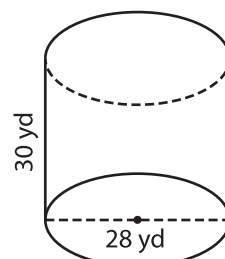
7)



Surface Area = \_\_\_\_\_



Surface Area = \_\_\_\_\_



Surface Area = \_\_\_\_\_