

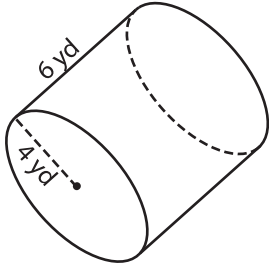
Name : _____

ES3

Surface Area - Cylinder

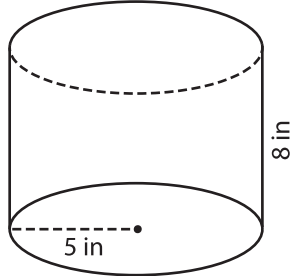
Find the surface area of each cylinder. (use $\pi = 3.14$)

1)



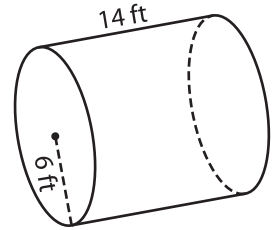
Surface Area = _____

2)

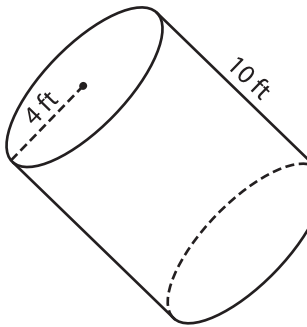


face Area = _____

3)



4)



Surface Area = _____

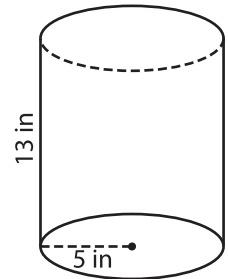
PREVIEW

Gain complete access to the largest collection of worksheets in all subjects!

Members, please log in to download this worksheet.

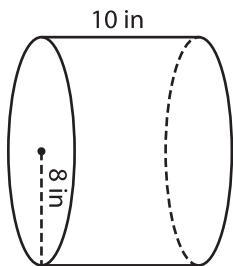
Not a member? Please sign up to gain complete access.

www.mathworksheets4kids.com

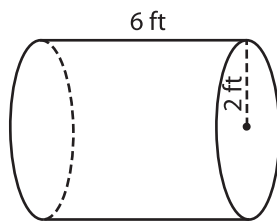


face Area = _____

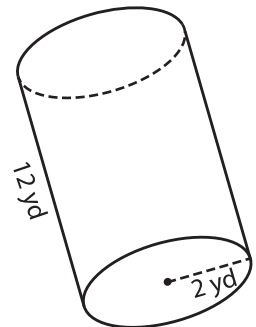
7)



Surface Area = _____



Surface Area = _____



Surface Area = _____