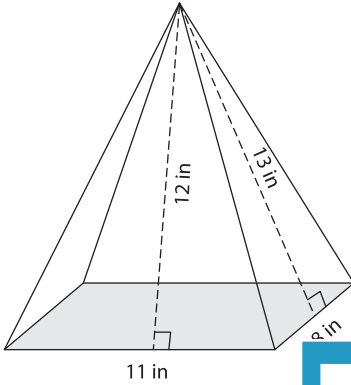


# Surface Area of Rectangular Pyramids

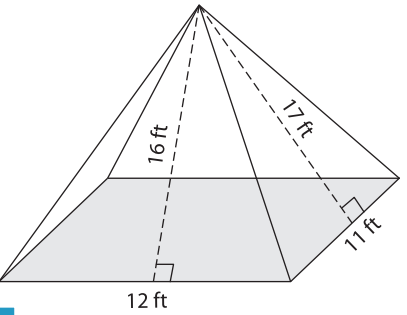
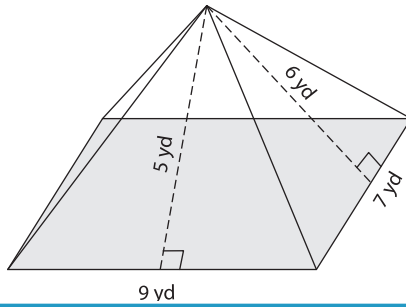
Find the surface area of each rectangular pyramid.

1)



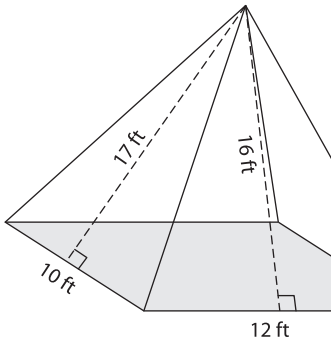
Surface Area = \_\_\_\_\_

2)

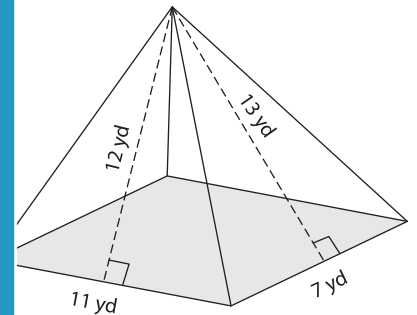


Surface Area = \_\_\_\_\_

4)

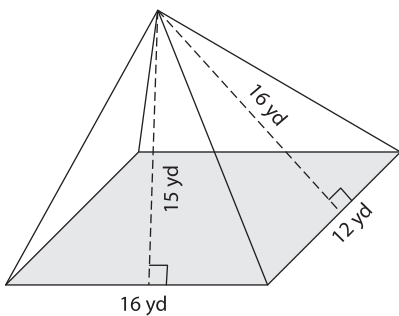


Surface Area = \_\_\_\_\_

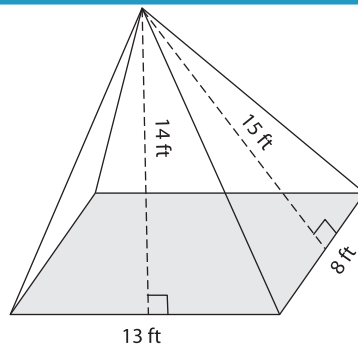


Surface Area = \_\_\_\_\_

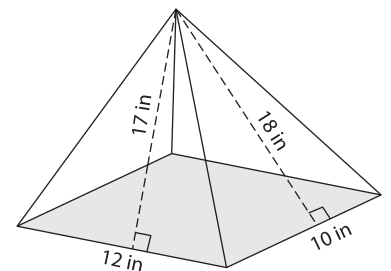
7)



Surface Area = \_\_\_\_\_



Surface Area = \_\_\_\_\_



Surface Area = \_\_\_\_\_

## PREVIEW

Gain complete access to the largest collection of worksheets in all subjects!

Members, please log in to download this worksheet.

Not a member? Please sign up to gain complete access.

[www.mathworksheets4kids.com](http://www.mathworksheets4kids.com)