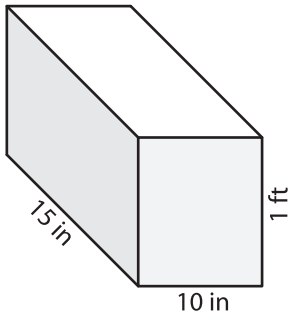


Name : _____

Surface Area - Rectangular Prism

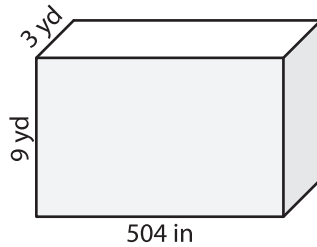
Find the surface area of each rectangular prism.

1)



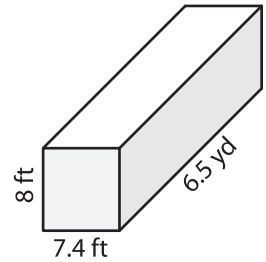
Surface Area = _____ in²

2)



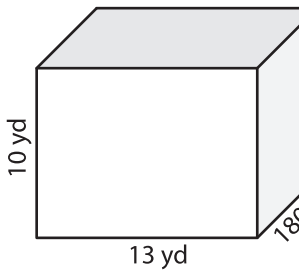
Surface Area = _____ yd²

3)

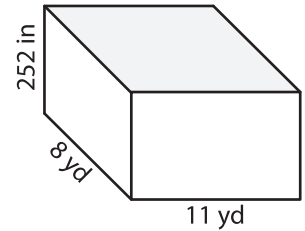


Surface Area = _____ ft²

4)

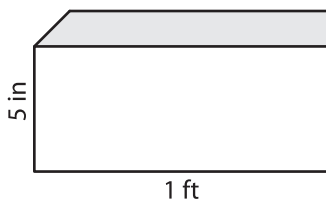


Surface Area = _____



Surface Area = _____ yd²

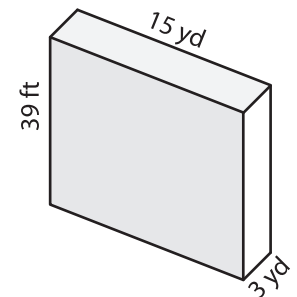
7)



Surface Area = _____ in²

Surface Area = _____ ft²

Surface Area = _____ yd²



10) Janet bought a large moving box to store her things in a storage unit. If its dimensions are 0.66 yards, 36 inches, and 1.2 yards, find the surface area of the box.

Surface Area = _____ square yards

PREVIEW

Gain complete access to the largest collection of worksheets in all subjects!

Members, please log in to download this worksheet.

Not a member? Please sign up to gain complete access.

www.mathworksheets4kids.com