

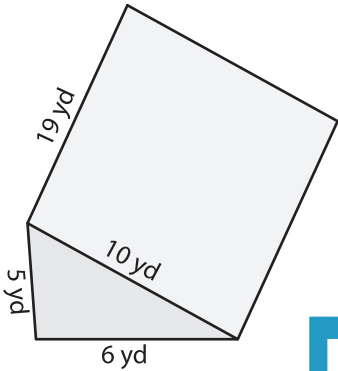
Name : _____

Volume - Triangular Prism

Sheet 3

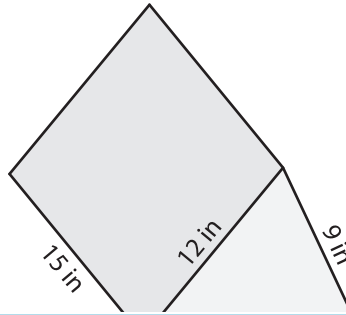
Find the volume of each triangular prism. Round your answer to two decimal places.

1)



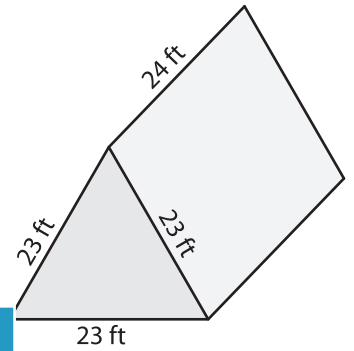
Volume = _____

2)

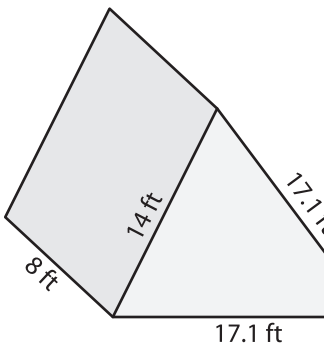


Volume = _____

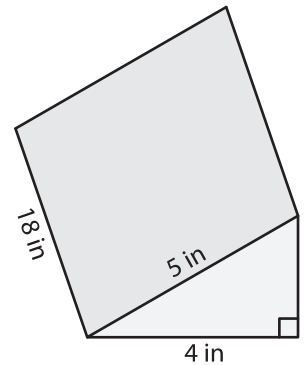
3)



4)



Volume = _____



Volume = _____

7) The height of a triangular prism is 10 feet, 13 feet and 19.4 feet, find the volume of the triangular prism.

10 feet, 13 feet and 19.4 feet, find the volume of the triangular prism.

PREVIEW

Gain complete access to the largest collection of worksheets in all subjects!

Members, please log in to download this worksheet.

Not a member? Please sign up to gain complete access.

www.mathworksheets4kids.com

8) The base of a prism is an equilateral triangle whose side measures 13 yards. Determine the volume if its height is 26 yards. Round your answer to two decimal places.