

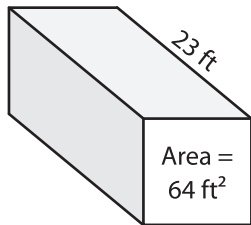
Name: \_\_\_\_\_

## Volume - Prism

Integers: S2

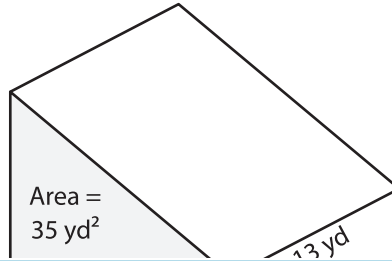
Find the volume of each shape.

1)



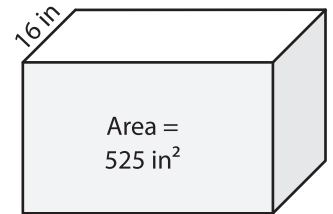
Volume = \_\_\_\_\_

2)



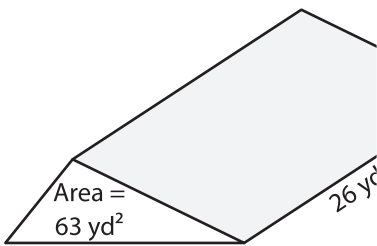
Area = 35 yd<sup>2</sup>

3)



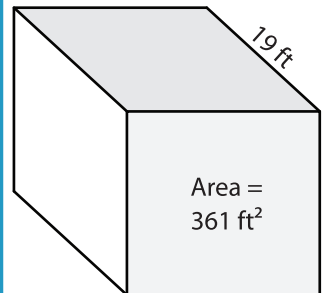
Volume = \_\_\_\_\_

4)



Volume = \_\_\_\_\_

7) A triangular prism has a h



Volume = \_\_\_\_\_

et. What is its volume?

# PREVIEW

Gain complete access to the largest collection of worksheets in all subjects!

Members, please log in to download this worksheet.

Not a member? Please sign up to gain complete access.

[www.mathworksheets4kids.com](http://www.mathworksheets4kids.com)

8) The base area of a rectangular prism is 15 square yards. Find the volume if its length is 19 yards.