

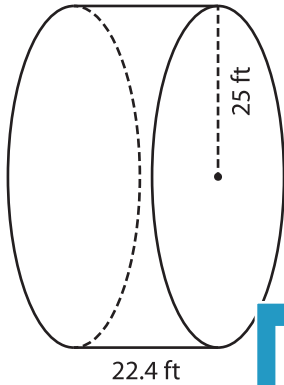
Name : _____

Decimals: ES2

Volume - Cylinder

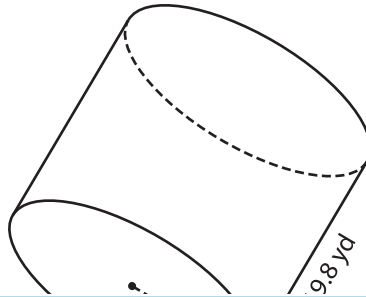
A) Find the volume of each cylinder. Round your answer to two decimal places. (use $\pi = 3.14$)

1)



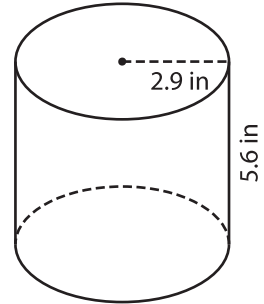
Volume = _____

2)



Volume = _____

3)



Volume = _____

B) Find the volume of each cylinder. Round your answer to two decimal places.

4) height = 28.2 ft ; radius = 15.3 yd

Volume = _____

6) radius = 7.1 yd ; height = 13.5 in

Volume = _____

Volume = _____

8) The height of a cylindrical candle holder is 5.6 inches. The radius is 2.1 inches. Find the volume of the holder. Round your answer to two decimal places. (use $\pi = 3.14$)

PREVIEW

Gain complete access to the largest collection of worksheets in all subjects!

Members, please log in to download this worksheet.

Not a member? Please sign up to gain complete access.

www.mathworksheets4kids.com