

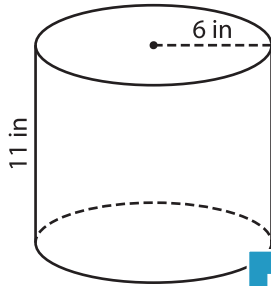
Name : _____

Volume - Cylinder

Integers: ES1

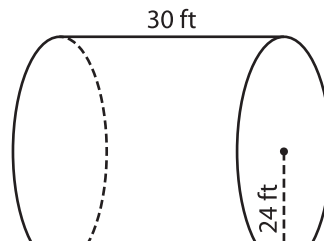
A) Find the volume of each cylinder. (use $\pi = 3.14$)

1)



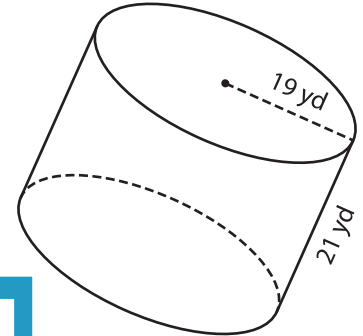
Volume = _____

2)



Volume = _____

3)



Volume = _____

B) Find the volume of each cylinder. (use $\pi = 3.14$)

4) height = 9 ft ; radius = 4 ft

Volume = _____

6) radius = 16 in ; height = 10 in

Volume = _____

5) height = 8 yd ; radius = 5 yd

Volume = _____

7) radius = 10 ft ; height = 12 ft

Volume = _____

8) A cylindrical flower vase is 11-inch tall. Find the volume of the vase, if the radius is 4 inches. (use $\pi = 3.14$)

PREVIEW

Gain complete access to the largest collection of worksheets in all subjects!

Members, please log in to download this worksheet.

Not a member? Please sign up to gain complete access.

www.mathworksheets4kids.com