

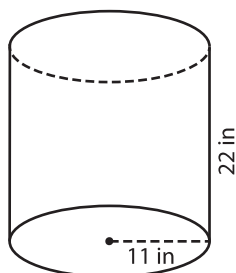
Name : _____

Volume - Cylinder

Integers: ES4

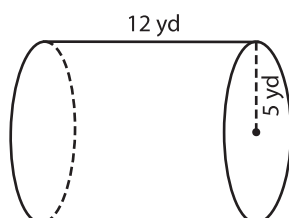
A) Find the volume of each cylinder. (use $\pi = 3.14$)

1)



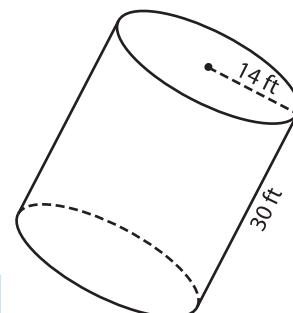
Volume = _____

2)



Volume = _____

3)



Volume = _____

B) Find the volume of each cylinder. (use $\pi = 3.14$)

4) height = 9 yd ; radius = 4 yd

Volume = _____

6) radius = 6 ft ; height = 12 ft

Volume = _____

Gain complete access to the largest collection of worksheets in all subjects!

Members, please log in to download this worksheet.

Not a member? Please sign up to gain complete access.

www.mathworksheets4kids.com

height = 25 in

radius = 3 yd

Volume = _____

8) If the height of a washer tub is 18 inches and its radius 12 inches, what is the volume of the tub? (use $\pi = 3.14$)
