

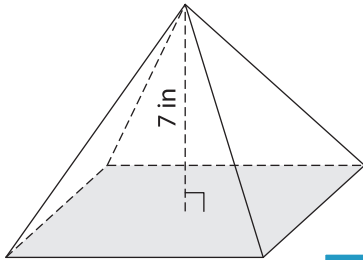
Name : _____

Volume - Pyramids

Integers: 51

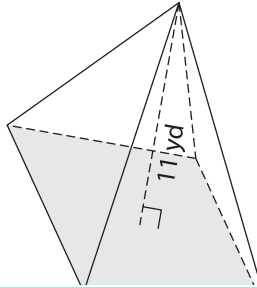
Find the volume of each pyramid. Round your answer to two decimal places.

1) Base area = 105 in^2

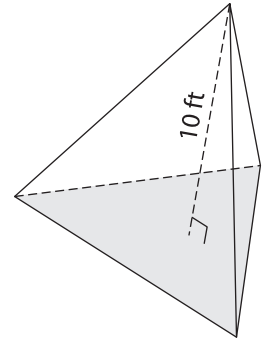


Volume = _____

2) Base area = 66 yd^2

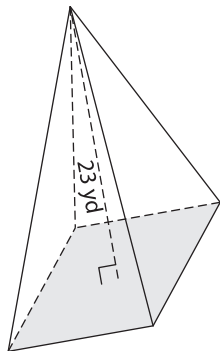


3) Base area = 148 ft^2



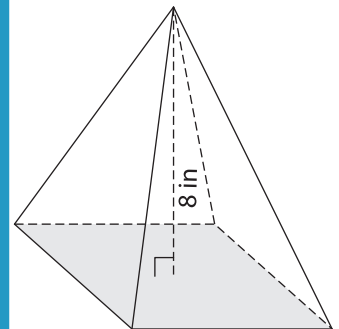
Volume = _____

4) Base area = 153 yd^2



Volume = _____

Base area = 49 in^2



Volume = _____

7) Find the volume of the square pyramid with a height of 12 feet.

PREVIEW

Gain complete access to the largest collection of worksheets in all subjects!

Members, please log in to download this worksheet.

Not a member? Please sign up to gain complete access.

www.mathworksheets4kids.com

8) A triangular pyramid has a height of 28 yards and a base with area of 172 square yards. What is its volume? Round your answer to two decimal places.
