

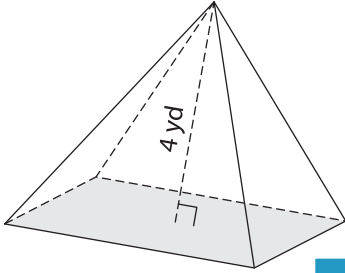
Name : _____

Volume - Pyramids

Integers: S2

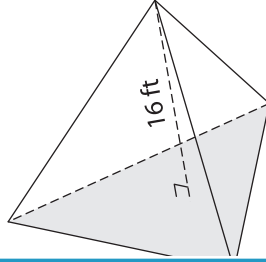
Find the volume of each pyramid. Round your answer to two decimal places.

1) Base area = 79 yd^2



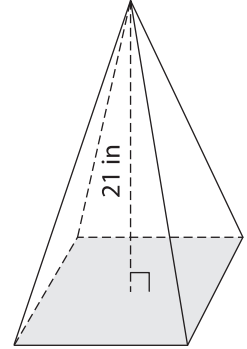
Volume = _____

2) Base area = 90 ft^2

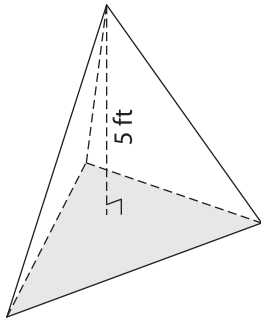


Volume = _____

3) Base area = 120 in^2

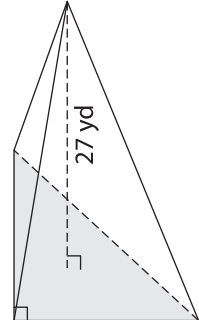


4) Base area = 136 ft^2



Volume = _____

Base area = 213 yd^2



Volume = _____

7) The height of a rectangular pyramid is 12 feet. The base area is 150 ft^2 . Round your answer to two decimal places.

Base area = 150 ft^2 . Round your answer to two decimal places.

PREVIEW

Gain complete access to the largest collection of worksheets in all subjects!

Members, please log in to download this worksheet.

Not a member? Please sign up to gain complete access.

www.mathworksheets4kids.com

8) The base area of a square pyramid is 87 square inches . Find the volume if its height is 15 inches .