

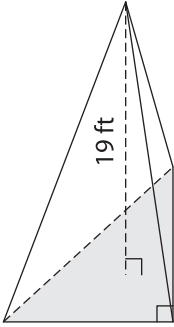
Name : _____

Volume - Pyramids

Integers: S3

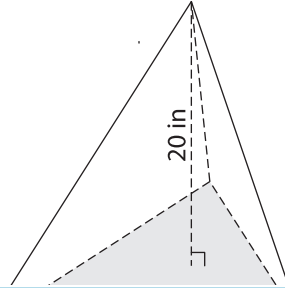
Find the volume of each pyramid. Round your answer to two decimal places.

1) Base area = 42 ft^2



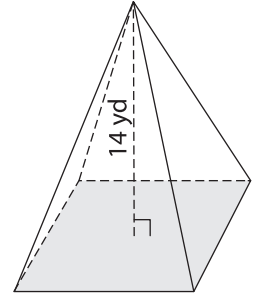
Volume = _____

2) Base area = 164 in^2

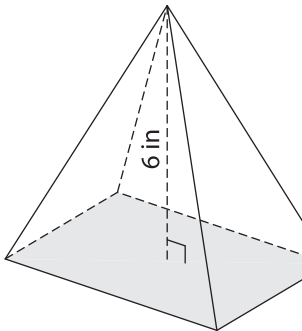


Volume = _____

3) Base area = 39 yd^2

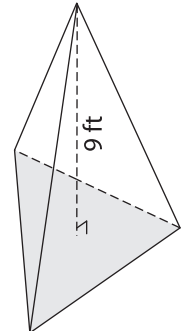


4) Base area = 206 in^2



Volume = _____

Base area = 63 ft^2



Volume = _____

7) The base area of a triangle _____

Volume if its height is 17 inches.

PREVIEW

Gain complete access to the largest collection of worksheets in all subjects!

Members, please log in to download this worksheet.

Not a member? Please sign up to gain complete access.

www.mathworksheets4kids.com

8) A rectangular pyramid has a height of 22 feet and a base with area of 222 square feet. Find the volume of the pyramid.
