

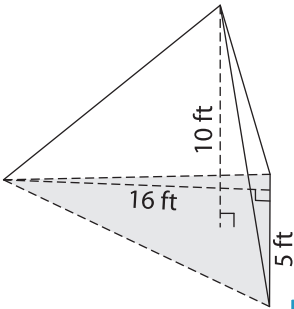
Name : _____

Volume - Triangular Pyramid

ES1

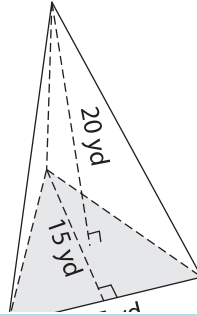
Find the volume of each triangular pyramid. Round your answer to two decimal places.

1)

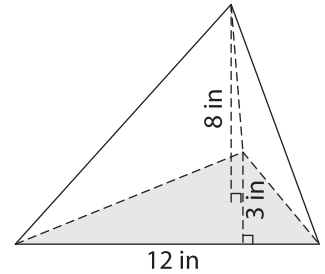


Volume = _____

2)

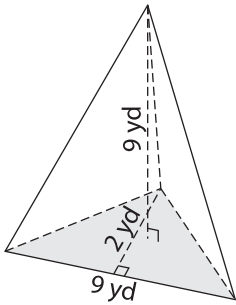


3)



Volume = _____

4)



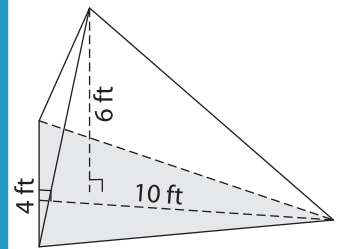
Volume = _____

PREVIEW
Gain complete access to the largest collection of worksheets in all subjects!

Members, please log in to download this worksheet.

Not a member? Please sign up to gain complete access.

www.mathworksheets4kids.com



Volume = _____

7) The base of a pyramid is a triangle whose base is 14 yards and height is 14 yards. Find the volume of the pyramid, if its height is 14 yards.

es. Find the volume of the

8) The base of a pyramid is a triangle whose base is 11 yards and height is 19 yards. Determine the volume of the pyramid, if its height is 7 yards. Round your answer to two decimal places.