

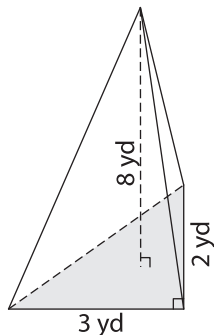
Name : _____

Volume - Triangular Pyramid

ES2

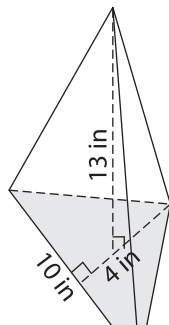
Find the volume of each triangular pyramid. Round your answer to two decimal places.

1)

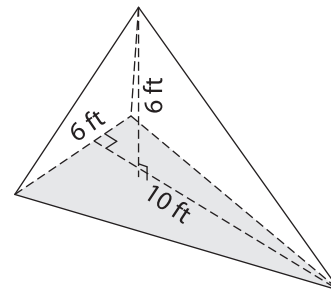


Volume = _____

2)

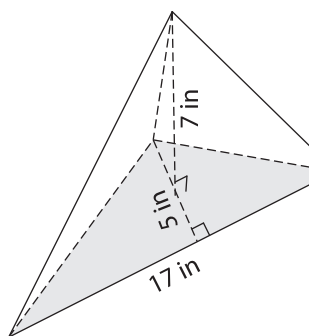


3)



Volume = _____

4)



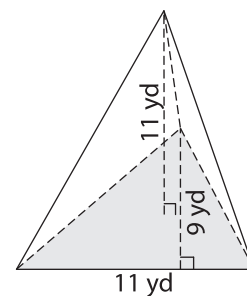
Volume = _____

Gain complete access to the largest collection of worksheets in all subjects!

Members, please log in to download this worksheet.

Not a member? Please sign up to gain complete access.

www.mathworksheets4kids.com



Volume = _____

7) The base of a pyramid is a triangle with a base of 10 yards and a height of 5 yards. Find the volume, if its height is 20 yards.

yards. Find the volume,

8) The base of a pyramid is a triangle with a base and height of 8 feet each. Determine the volume of the pyramid, if its height is 8 feet. Round your answer to two decimal places.
