

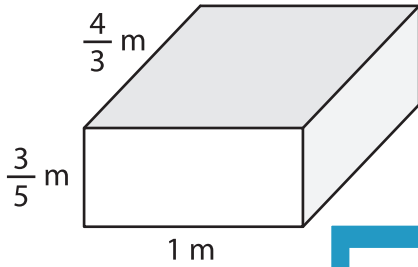
Name : \_\_\_\_\_

## Volume - Rectangular Prism

Fractions: S2

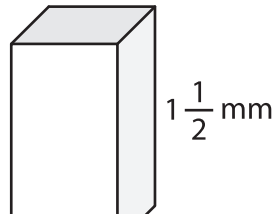
A) Find the volume of each rectangular prism.

1)

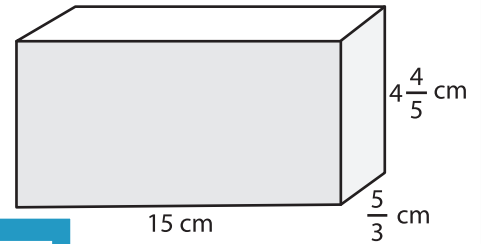


Volume = \_\_\_\_\_

2)



3)



Volume = \_\_\_\_\_

B) Find the volume of each

4) height =  $\frac{1}{2}$  cm; width = \_\_\_\_\_  
length = 9 cm

Volume = \_\_\_\_\_

6) width =  $\frac{4}{7}$  m; length = \_\_\_\_\_

Volume = \_\_\_\_\_

**PREVIEW**

Gain complete access to the largest collection of worksheets in all subjects!

Members, please log in to download this worksheet.

Not a member? Please sign up to gain complete access.

[www.mathworksheets4kids.com](http://www.mathworksheets4kids.com)

height =  $1\frac{1}{5}$  mm;

length = 3 cm; width =  $\frac{8}{9}$  cm

Volume = \_\_\_\_\_

8) A rectangular prism has a length of  $2\frac{2}{3}$  m, a width of  $\frac{1}{4}$  m, and a height of 2 m. Determine the volume of the prism.

\_\_\_\_\_