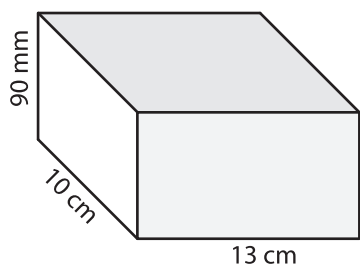


Name : _____

Surface Area - Rectangular Prism

Find the surface area of each rectangular prism.

1)



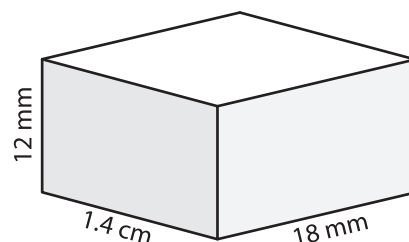
Surface Area = _____ cm^2

2)



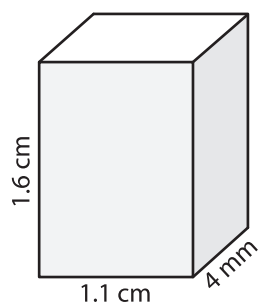
Surface Area = _____ m^2

3)

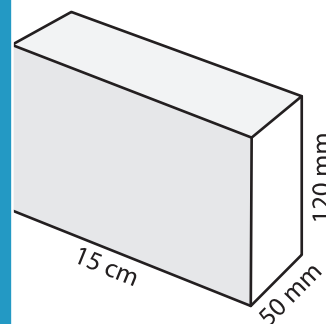


Surface Area = _____ mm^2

4)

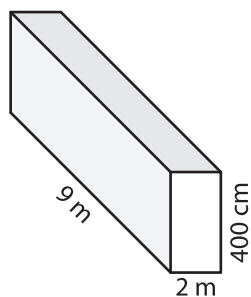


Surface Area = _____



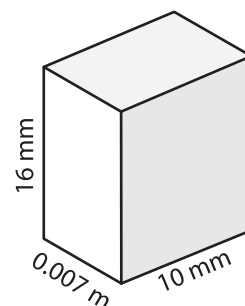
Surface Area = _____ cm^2

7)



Surface Area = _____ m^2

Surface Area = _____ m^2



Surface Area = _____ mm^2

PREVIEW

Gain complete access to the largest collection of worksheets in all subjects!

Members, please log in to download this worksheet.

Not a member? Please sign up to gain complete access.

www.mathworksheets4kids.com

- 10) Juliet makes a rectangular jewellery box out of cardboard. If the box is 24 cm long, 0.3 m wide, and 10.2 cm high, what is the surface area of the jewellery box?

Surface Area = _____ cm^2