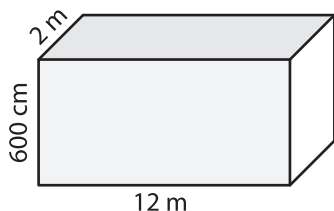


Name : _____

Surface Area - Rectangular Prism

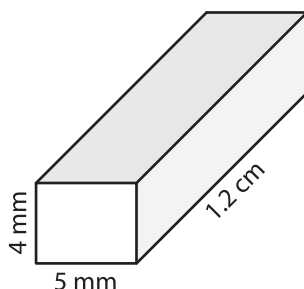
Find the surface area of each rectangular prism.

1)



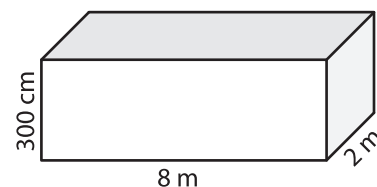
Surface Area = _____ m^2

2)



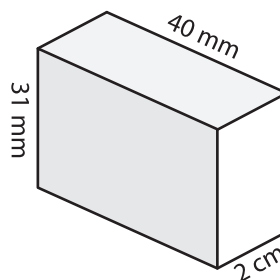
Surface Area = _____ mm^2

3)

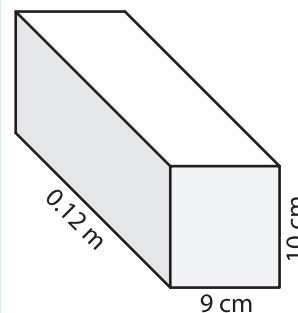


Surface Area = _____ m^2

4)

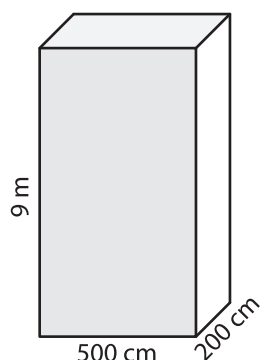


Surface Area = _____



Surface Area = _____ cm^2

7)



Surface Area = _____ m^2

Surface Area = _____ mm^2

Surface Area = _____ cm^2

PREVIEW

Gain complete access to the largest collection of worksheets in all subjects!

Members, please log in to download this worksheet.

Not a member? Please sign up to gain complete access.

www.mathworksheets4kids.com

- 10) Cressida made her own bar of soap with the following dimensions: 0.23 m, 50 mm, and 25 mm. Find the surface area of the bar of soap.

Surface Area = _____ mm^2