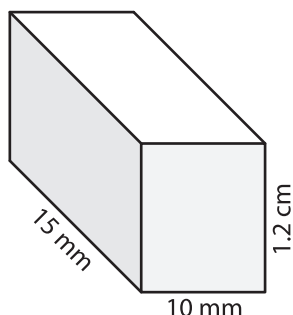


Name : \_\_\_\_\_

## Surface Area - Rectangular Prism

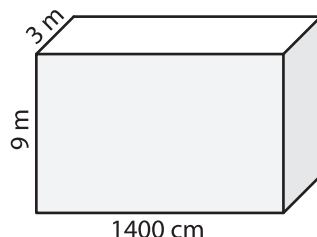
Find the surface area of each rectangular prism.

1)



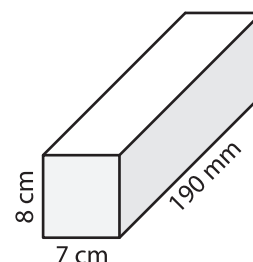
Surface Area = \_\_\_\_\_ mm<sup>2</sup>

2)



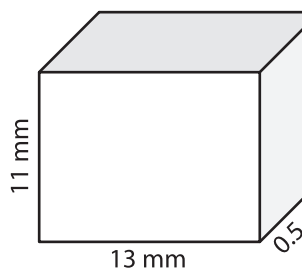
Surface Area = \_\_\_\_\_ m<sup>2</sup>

3)

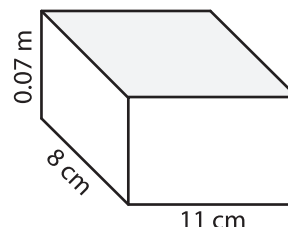


Surface Area = \_\_\_\_\_ cm<sup>2</sup>

4)

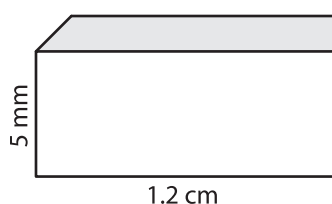


Surface Area = \_\_\_\_\_



Surface Area = \_\_\_\_\_ cm<sup>2</sup>

7)



Surface Area = \_\_\_\_\_ mm<sup>2</sup>

Surface Area = \_\_\_\_\_ m<sup>2</sup>

Surface Area = \_\_\_\_\_ cm<sup>2</sup>

# PREVIEW

Gain complete access to the largest collection of worksheets in all subjects!

Members, please log in to download this worksheet.

Not a member? Please sign up to gain complete access.

[www.mathworksheets4kids.com](http://www.mathworksheets4kids.com)

- 10) Janet bought a large moving box to store her things in a storage unit. If its dimensions are 0.6 m, 91 cm, and 1.1 m, find the surface area of the box.

Surface Area = \_\_\_\_\_ m<sup>2</sup>