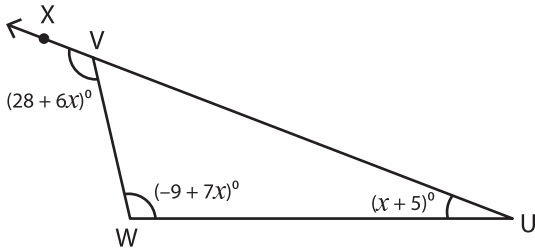


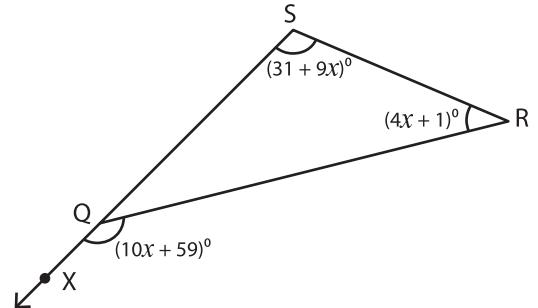
Triangle - Exterior Angles

A) Solve for x in each triangle and find the measure of the indicated angle.

1)



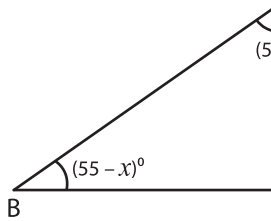
2)



$x =$ _____

$m\angle U =$ _____

3)



$x =$ _____

$m\angle BCD =$ _____

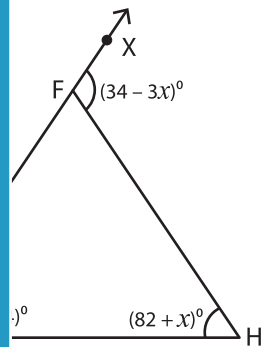
PREVIEW

Gain complete access to the largest collection of worksheets in all subjects!

Members, please log in to download this worksheet.

Not a member? Please sign up to gain complete access.

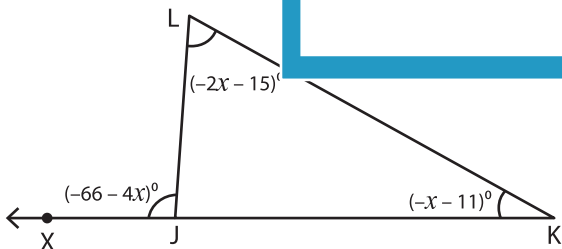
www.mathworksheets4kids.com



$m\angle F =$ _____

B) Solve for x in each triangle and find the measure of the indicated angle.

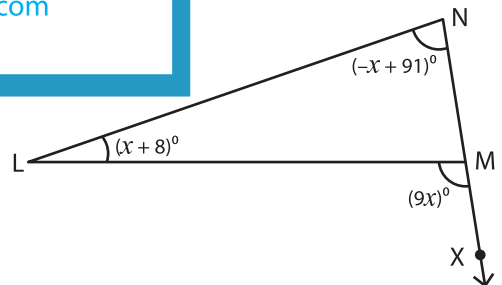
5)



$x =$ _____

$m\angle XJL =$ _____ ; $m\angle K =$ _____

$m\angle LJK =$ _____ ; $m\angle L =$ _____



$x =$ _____

$m\angle LMN =$ _____ ; $m\angle N =$ _____

$m\angle NML =$ _____ ; $m\angle L =$ _____