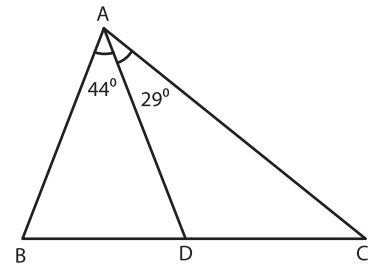


Name : \_\_\_\_\_

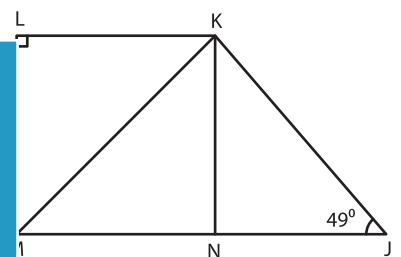
# Triangle - Angles

1) In the figure,  $\triangle ABD$  is an isosceles triangle with  $AB = AD$ . Find  $m\angle ACB$ .



\_\_\_\_\_

2) In the figure, KLMN is a square. Determine  $m\angle MKJ$ .



\_\_\_\_\_

3) Triangle OPQ and triangle

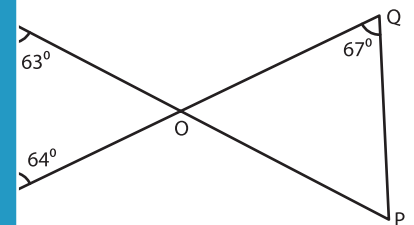
**PREVIEW**

Gain complete access to the largest collection of worksheets in all subjects!

Members, please log in to download this worksheet.

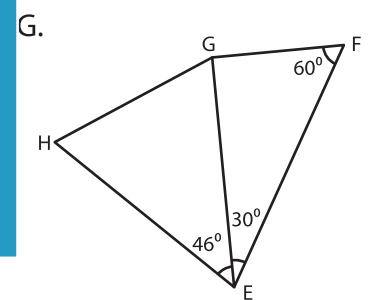
Not a member? Please sign up to gain complete access.

[www.mathworksheets4kids.com](http://www.mathworksheets4kids.com)



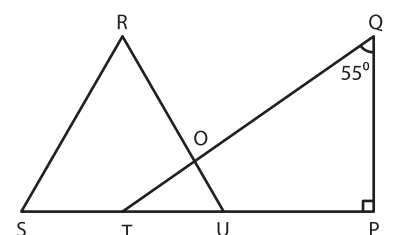
\_\_\_\_\_

4) If  $\triangle EGH$  is an isosceles triangle



\_\_\_\_\_

5)  $\triangle RSU$  is an equilateral triangle. What is  $m\angle QTP$  and  $m\angle TOU$ ?



\_\_\_\_\_