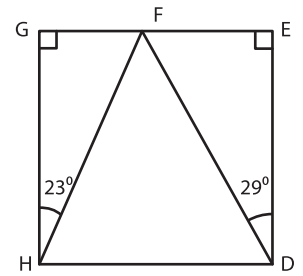


Name : \_\_\_\_\_

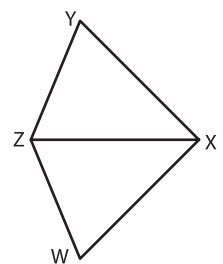
# Triangle - Angles

1) In the figure,  $\triangle DEF$  and  $\triangle HGF$  are right triangles. Find  $m\angle DFH$ .



\_\_\_\_\_

2)  $\triangle XYZ$  and  $\triangle XWZ$  are isosceles triangles. Determine  $m\angle YZW$ , if  $m\angle WXY = 90^\circ$ .



\_\_\_\_\_

3)  $\triangle KLM$  is an equilateral triangle.

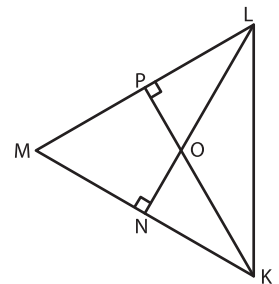
**PREVIEW**

Gain complete access to the largest collection of worksheets in all subjects!

Members, please log in to download this worksheet.

Not a member? Please sign up to gain complete access.

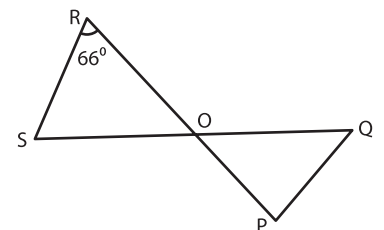
[www.mathworksheets4kids.com](http://www.mathworksheets4kids.com)



\_\_\_\_\_

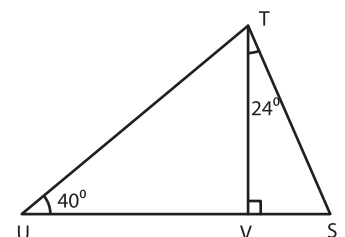
4)  $\triangle OPQ$  and  $\triangle ORS$  are isosceles triangles.

Determine  $m\angle ROQ$ .



\_\_\_\_\_

5) In the figure, triangle TVS is a right triangle. Determine  $m\angle UTS$  and  $m\angle VST$ .



\_\_\_\_\_