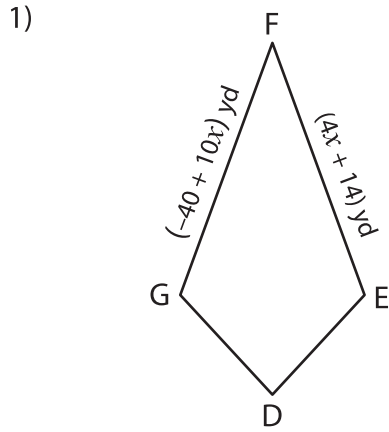


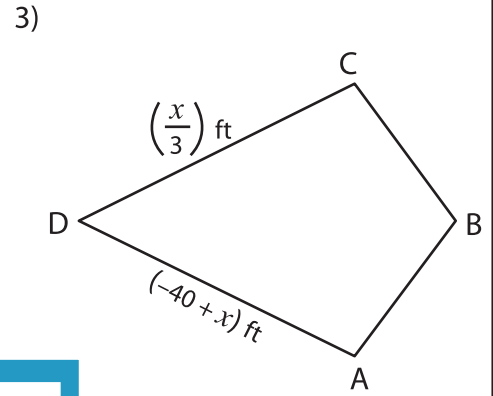
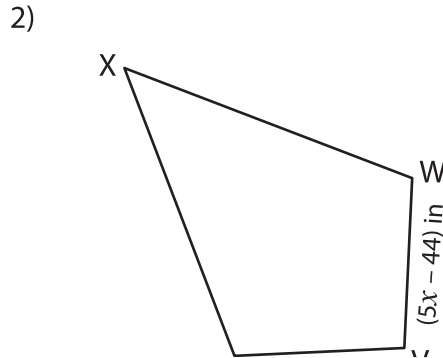
Kite

A) Solve for x and find the indicated side length of each kite.



$x =$ _____

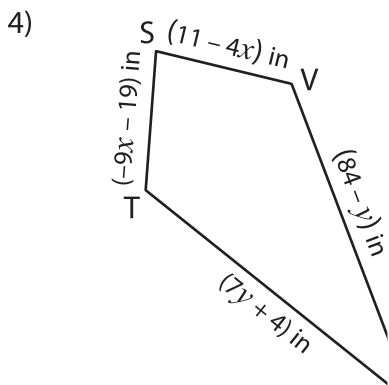
EF = _____



$x =$ _____

CD = _____

B) Solve for x and y and



$x =$ _____

$y =$ _____

ST = _____

VU = _____

PREVIEW

Gain complete access to the largest collection of worksheets in all subjects!

Members, please log in to download this worksheet.

Not a member? Please sign up to gain complete access.

www.mathworksheets4kids.com

$x =$ _____

$y =$ _____

RS = _____

PQ = _____

