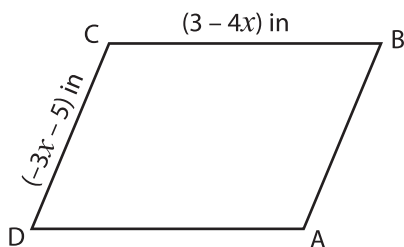


## Perimeter of a Parallelogram

Find the indicated side lengths of each parallelogram from the given perimeter.

1)



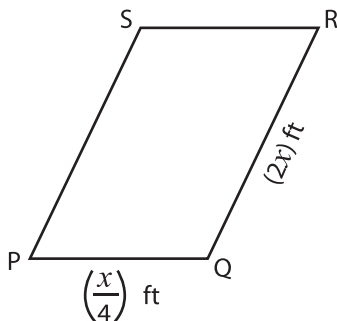
Perimeter = 66 in

$x =$  \_\_\_\_\_

DA = \_\_\_\_\_

AB = \_\_\_\_\_

2)



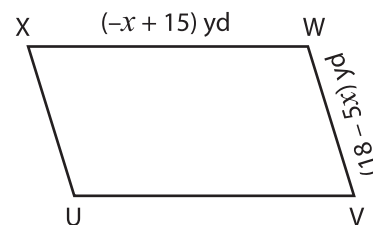
Perimeter = 30 yd

$x =$  \_\_\_\_\_

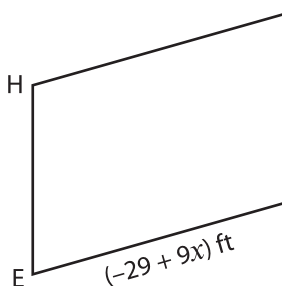
UV = \_\_\_\_\_

VW = \_\_\_\_\_

3)



4)



Perimeter = 118 ft

$x =$  \_\_\_\_\_

EF = \_\_\_\_\_

HE = \_\_\_\_\_

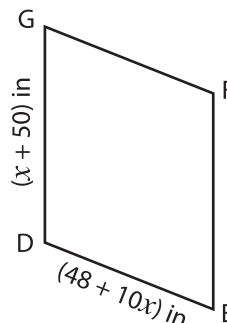
# PREVIEW

Gain complete access to the largest collection of worksheets in all subjects!

Members, please log in to download this worksheet.

Not a member? Please sign up to gain complete access.

[www.mathworksheets4kids.com](http://www.mathworksheets4kids.com)



Perimeter = 152 in

$x =$  \_\_\_\_\_

DE = \_\_\_\_\_

GD = \_\_\_\_\_

7) The adjacent side lengths of a parallelogram are  $(x + 5)$  yards and  $(-2 + 3x)$  yards. Determine the value of  $x$  and the lengths of the adjacent sides, if its perimeter is 70 yards.

\_\_\_\_\_