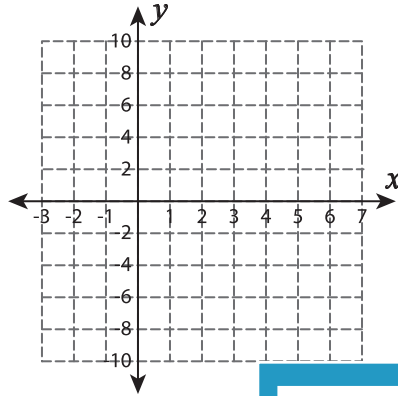


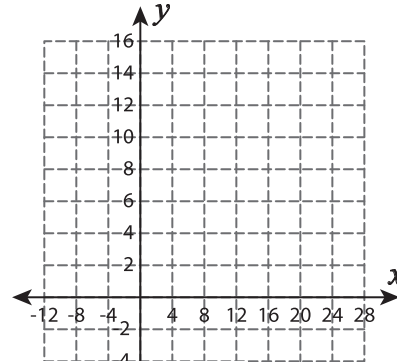
## Systems of Equations - Graphing

Graph each system of equations and find the solution.

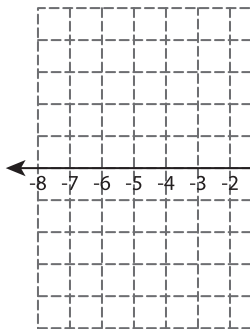
1)  $y = 6 - 2x$  ;  $y = -4x + 16$



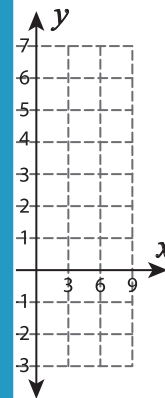
2)  $y = \frac{1}{4}x + 8$  ;  $x = 8$



3)  $y = x + 7$  ;  $y = -35$



$y = -\frac{2}{3}x$



# PREVIEW

Gain complete access to the largest collection of worksheets in all subjects!

Members, please log in to download this worksheet.

Not a member? Please sign up to gain complete access.

[www.mathworksheets4kids.com](http://www.mathworksheets4kids.com)

5)  $y = -\frac{2}{7}x - 18$  ;  $y =$

