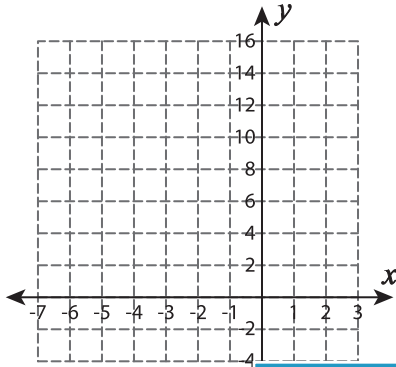


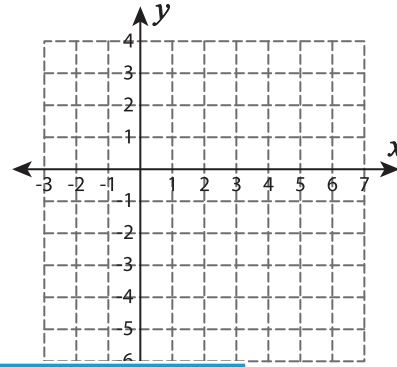
## Systems of Equations - Graphing

Graph each system of equations and find the solution.

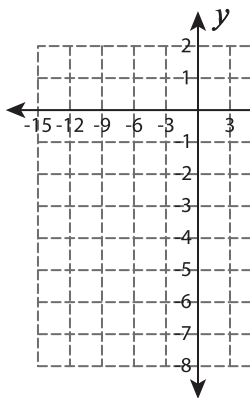
1)  $y = 3x + 28$  ;  $y = 2x + 22$



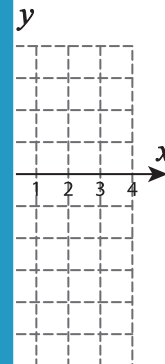
2)  $y = \frac{2}{3}x - 2$  ;  $y = \frac{4}{3}x - 2$



3)  $y = -4 + x$  ;  $y = 2x$



$y = -2 + \frac{1}{4}x$



# PREVIEW

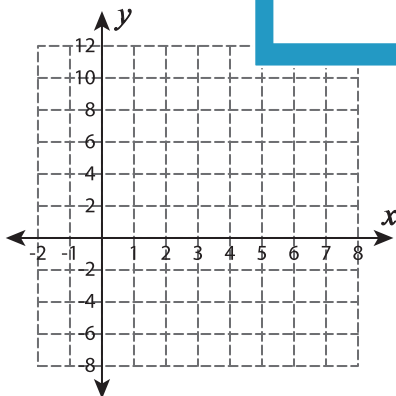
Gain complete access to the largest  
collection of worksheets in all subjects!

Members, please  
log in to  
download this  
worksheet.

Not a member?  
Please sign up to  
gain complete  
access.

[www.mathworksheets4kids.com](http://www.mathworksheets4kids.com)

5)  $y = 1 + x$  ;  $y = 2x - 5$



$y = x + 5$

