

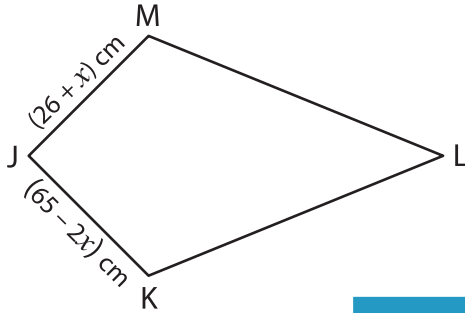
Name : _____

Kite

Sheet 2

A) Solve for x and find the indicated side length of each kite.

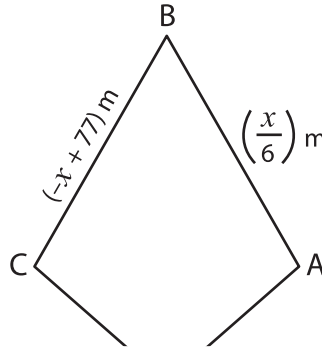
1)



$x =$ _____

$JK =$ _____

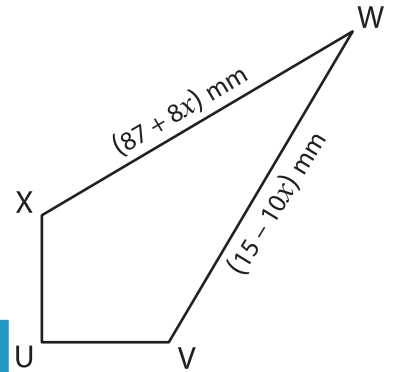
2)



$x =$ _____

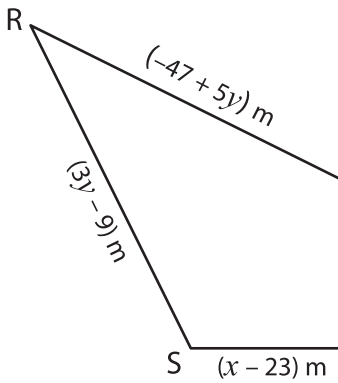
$VW =$ _____

3)



B) Solve for x and y and

4)



$x =$ _____

$y =$ _____

$PQ =$ _____

$QR =$ _____

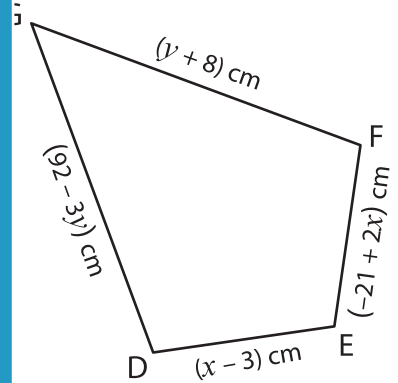
PREVIEW

Gain complete access to the largest collection of worksheets in all subjects!

Members, please log in to download this worksheet.

Not a member? Please sign up to gain complete access.

www.mathworksheets4kids.com



$x =$ _____

$y =$ _____

$EF =$ _____

$GD =$ _____