

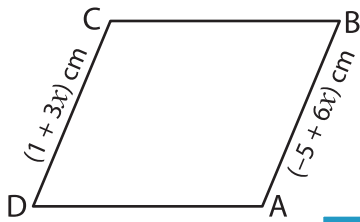
Name : _____

Parallelogram

Sheet 1

A) Find the indicated side length of each parallelogram.

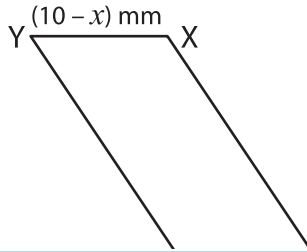
1)



$x =$ _____

AB = _____

2)



PREVIEW

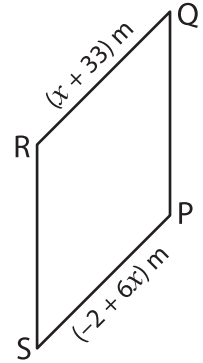
Gain complete access to the largest collection of worksheets in all subjects!

Members, please log in to download this worksheet.

Not a member? Please sign up to gain complete access.

www.mathworksheets4kids.com

3)

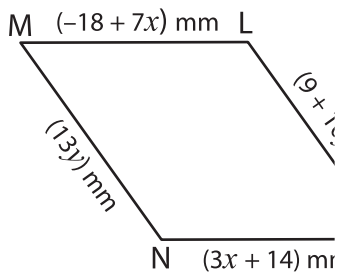


$x =$ _____

PS = _____

B) Find the indicated side length of each parallelogram.

4)



$x =$ _____

$y =$ _____

MN = _____

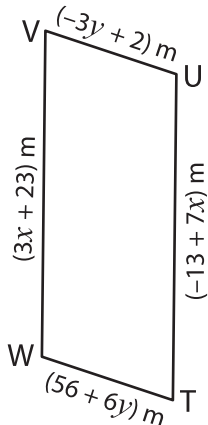
KN = _____

$x =$ _____

$y =$ _____

GH = _____

FG = _____



$x =$ _____

$y =$ _____

TU = _____

UV = _____