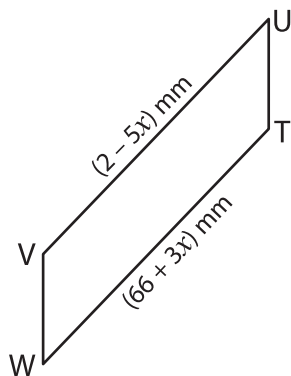


Parallelogram

A) Find the indicated side length of each parallelogram.

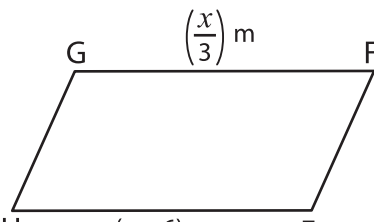
1)



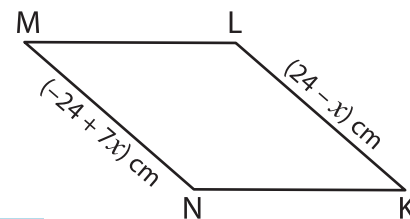
$x =$ _____

TW = _____

2)



3)

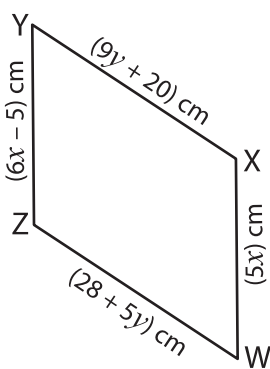


$x =$ _____

KL = _____

B) Find the indicated side length of each parallelogram.

4)



$x =$ _____

$y =$ _____

YZ = _____

ZW = _____

PREVIEW

Gain complete access to the largest collection of worksheets in all subjects!

Members, please log in to download this worksheet.

Not a member? Please sign up to gain complete access.

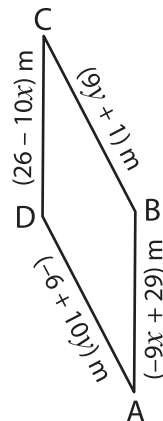
www.mathworksheets4kids.com

$x =$ _____

$y =$ _____

PS = _____

SR = _____



$x =$ _____

$y =$ _____

AB = _____

BC = _____