

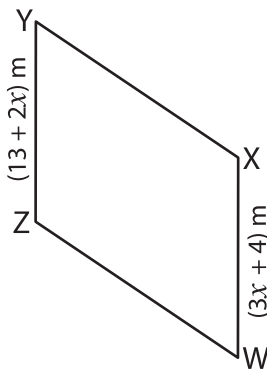
Name : _____

Parallelogram

Sheet 3

A) Find the indicated side length of each parallelogram.

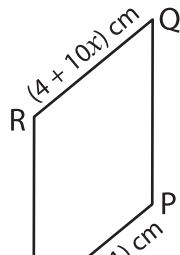
1)



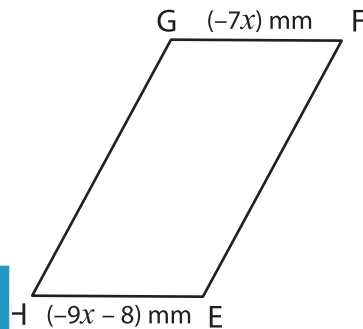
$x =$ _____

YZ = _____

2)



3)



$x =$ _____

GF = _____

B) Find the indicated side length of each parallelogram.

4)



$x =$ _____

$y =$ _____

TU = _____

UV = _____

PREVIEW

Gain complete access to the largest collection of worksheets in all subjects!

Members, please log in to download this worksheet.

Not a member? Please sign up to gain complete access.

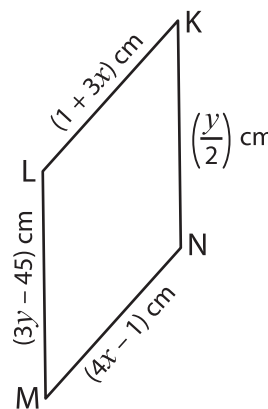
www.mathworksheets4kids.com

$x =$ _____

$y =$ _____

AB = _____

DA = _____



$x =$ _____

$y =$ _____

LM = _____

KL = _____