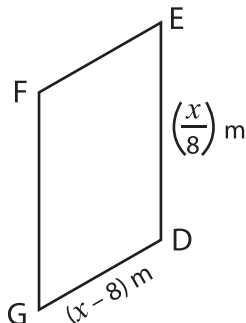


Perimeter of a Parallelogram

Find the indicated side lengths of each parallelogram from the given perimeter.

1)



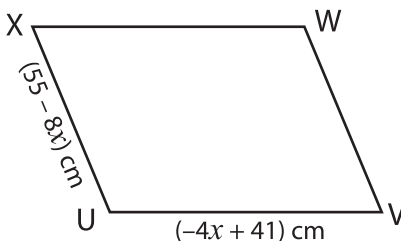
Perimeter = 20 m

$x =$ _____

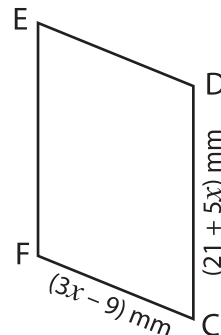
DE = _____

GD = _____

2)



3)



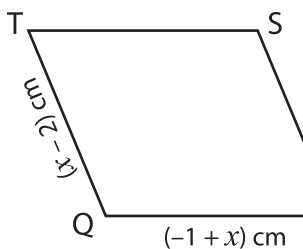
Perimeter = 104 mm

$x =$ _____

EF = _____

FC = _____

4)



Perimeter = 86 cm

$x =$ _____

ST = _____

RS = _____

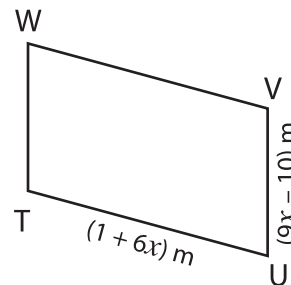
PREVIEW

Gain complete access to the largest collection of worksheets in all subjects!

Members, please log in to download this worksheet.

Not a member? Please sign up to gain complete access.

www.mathworksheets4kids.com



Perimeter = 42 m

$x =$ _____

UV = _____

TU = _____

7) The perimeter of a parallelogram is 106 m and its adjacent sides measure $(-3+x)$ m and $(x+6)$ m. Find the value of x and the lengths of the adjacent sides.
