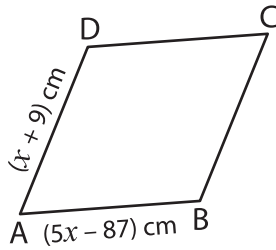


Rhombus

A) Find the value of x and then find the indicated side length in each rhombus.

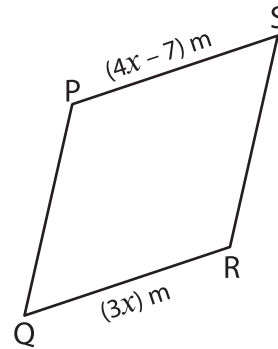
1)



$x =$ _____

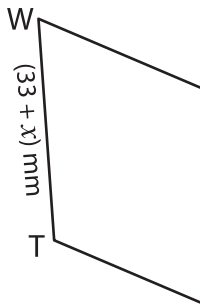
AB = _____

2)



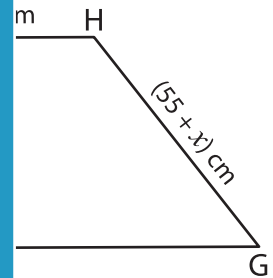
$x =$ _____

3)



$x =$ _____

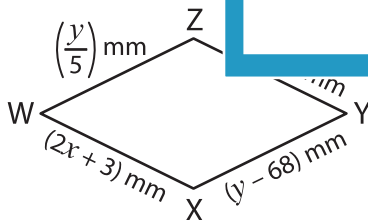
TW = _____



length.

B) Solve for x and y

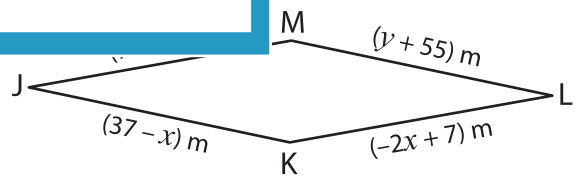
5)



$x =$ _____

$y =$ _____

WZ = _____



$x =$ _____

$y =$ _____

JK = _____

PREVIEW

Gain complete access to the largest collection of worksheets in all subjects!

Members, please log in to download this worksheet.

Not a member? Please sign up to gain complete access.

www.mathworksheets4kids.com