

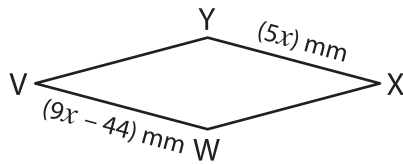
Name : _____

Rhombus

Sheet 2

A) Find the value of x and then find the indicated side length in each rhombus.

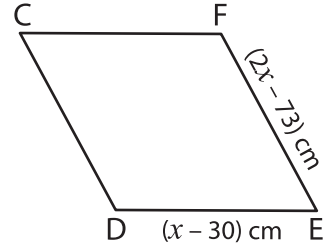
1)



$x =$ _____

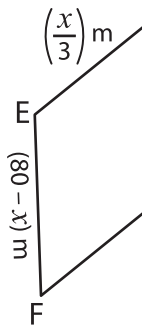
VW = _____

2)



$x =$ _____

3)



$x =$ _____

FG = _____

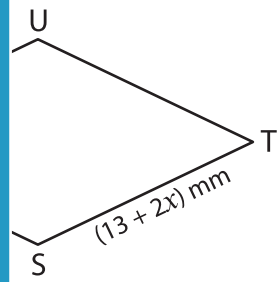
PREVIEW

Gain complete access to the largest collection of worksheets in all subjects!

Members, please log in to download this worksheet.

Not a member? Please sign up to gain complete access.

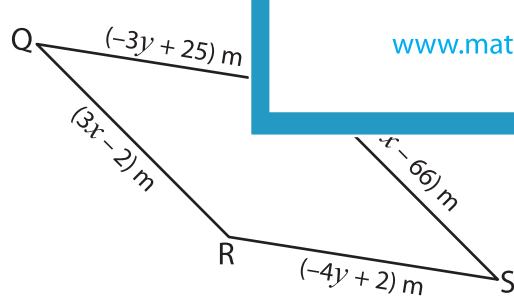
www.mathworksheets4kids.com



B) Solve for x and y

and find the indicated side length.

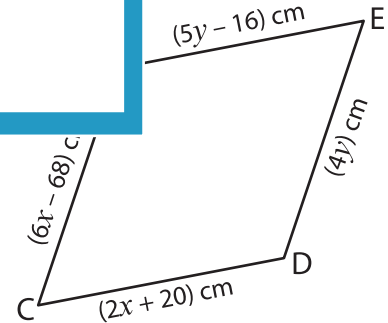
5)



$x =$ _____

$y =$ _____

QR = _____



$x =$ _____

$y =$ _____

BE = _____