

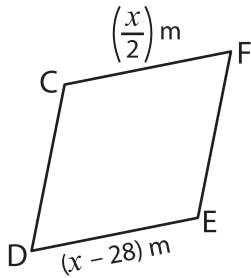
Name : _____

Rhombus

Sheet 3

A) Find the value of x and then find the indicated side length in each rhombus.

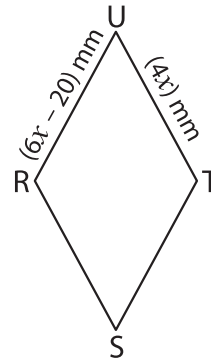
1)



$x =$ _____

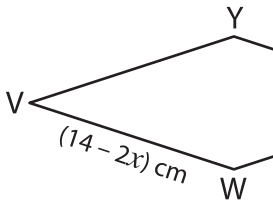
CD = _____

2)



$x =$ _____

3)

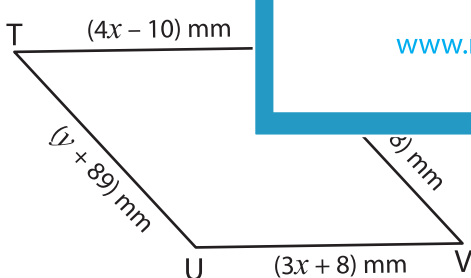


$x =$ _____

VW = _____

B) Solve for x and y

5)



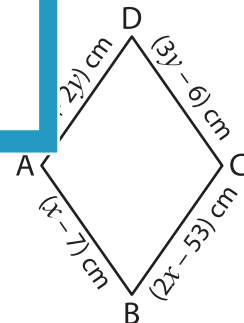
$x =$ _____

$y =$ _____

TU = _____



length.



$x =$ _____

$y =$ _____

BC = _____

PREVIEW

Gain complete access to the largest collection of worksheets in all subjects!

Members, please log in to download this worksheet.

Not a member? Please sign up to gain complete access.

www.mathworksheets4kids.com