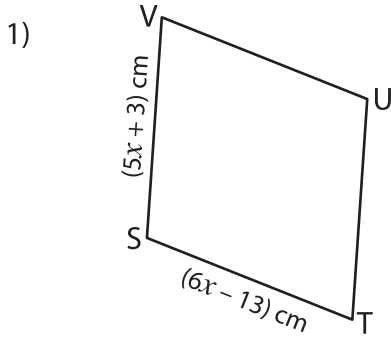
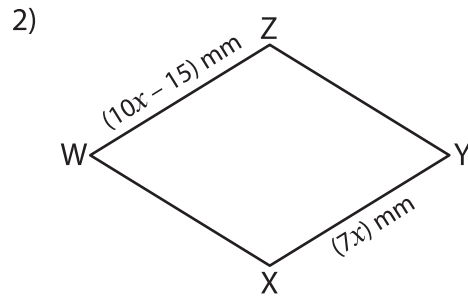


A) Find the value of x and then find the indicated side length in each rhombus.

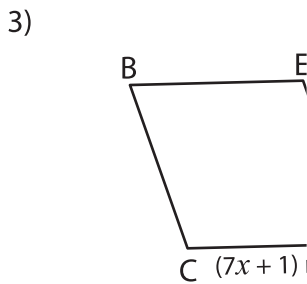


$x =$ _____




$x =$ _____

TU = _____



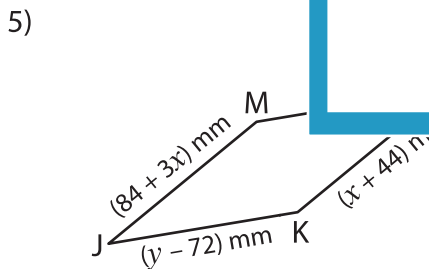
$x =$ _____

CD = _____



B) Solve for x and y

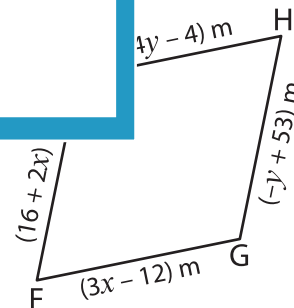
the length.



$x =$ _____

$y =$ _____

KL = _____



$x =$ _____

$y =$ _____

GH = _____

PREVIEW

Gain complete access to the largest collection of worksheets in all subjects!

Members, please log in to download this worksheet.

Not a member? Please sign up to gain complete access.

www.mathworksheets4kids.com