

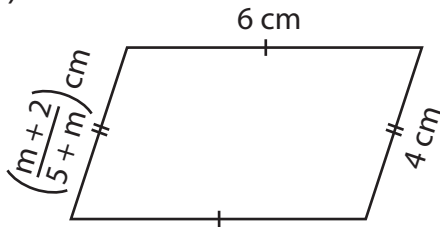
Name : \_\_\_\_\_

## Multi-Step Equations: Shapes

Type 1: S1

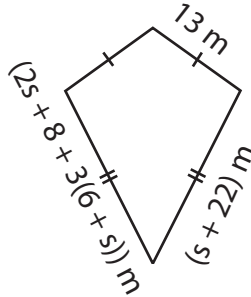
Find the unknown value given in each shape.

1)

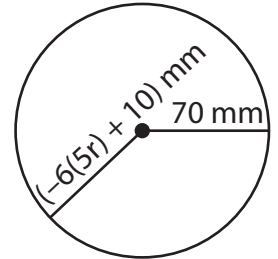


$m =$  \_\_\_\_\_

2)

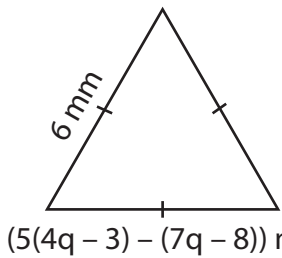


3)



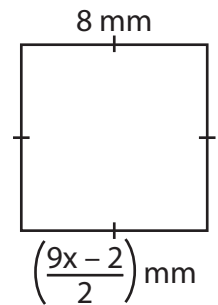
$r =$  \_\_\_\_\_

4)



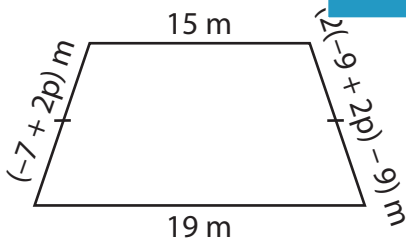
$q =$  \_\_\_\_\_

6)



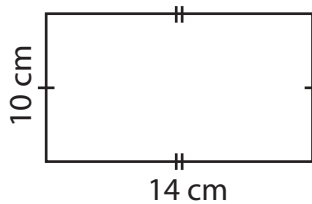
$x =$  \_\_\_\_\_

7)



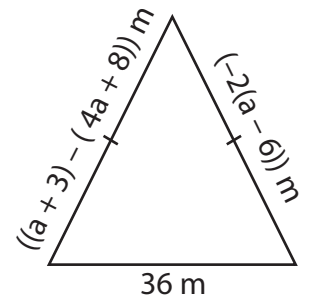
$p =$  \_\_\_\_\_

$(\frac{1}{3}(15-2v))$  cm



$v =$  \_\_\_\_\_

9)



$a =$  \_\_\_\_\_

# PREVIEW

Gain complete access to the largest collection of worksheets in all subjects!

Members, please log in to download this worksheet.

Not a member? Please sign up to gain complete access.

[www.mathworksheets4kids.com](http://www.mathworksheets4kids.com)