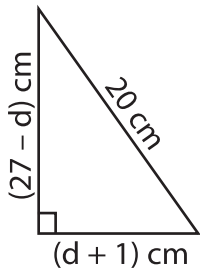


Multi-Step Equations: Shapes

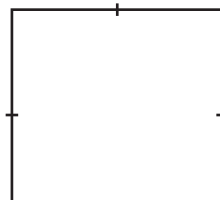
Find the unknown value given in each shape.

1) Perimeter = $(5d - 7)$ cm

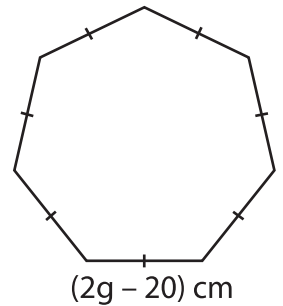


$d =$ _____

2) Area = $\left(\frac{21v + 32}{2}\right) \text{ m}^2$

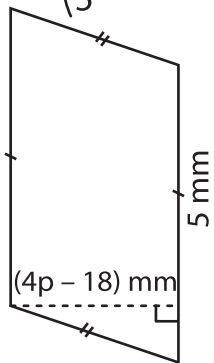


3) Perimeter = 28 cm



$g =$ _____

4) Area = $\left(\frac{1}{5}(11p - 5)\right)$



$p =$ _____

PREVIEW

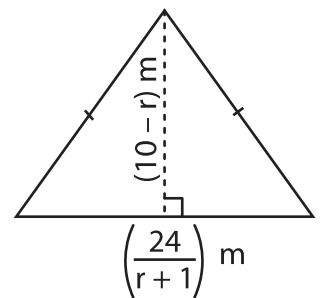
Gain complete access to the largest collection of worksheets in all subjects!

Members, please log in to download this worksheet.

Not a member? Please sign up to gain complete access.

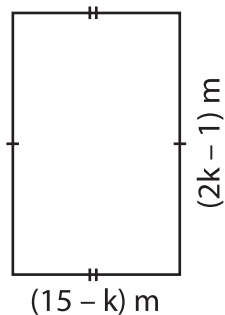
www.mathworksheets4kids.com

Area = 54 m^2

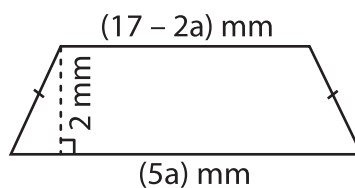


$r =$ _____

7) Perimeter = 42 m

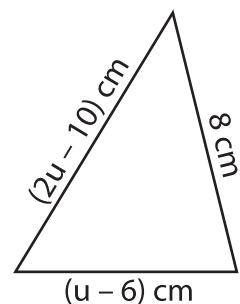


$k =$ _____



$a =$ _____

Perimeter = 31 cm



$u =$ _____