

Domain and Range - Ordered pairs

A) Find the domain and range of each relation.

1) $\{(1, -1), (2, -3), (0, 5), (-1, 3), (4, -5), (-1, 5), (4, -4)\}$

Domain : _____

Range : _____

2) $\{(3, -2), (-8, -7), (0, 6), (-3, 4), (6, -3), (-1, 6), (5, -3)\}$

Domain : _____

Range : _____

3) $\{(10, -5), (-16, -8), (15, 9), (-4, 19), (6, -7)\}$

Domain : _____

Range : _____

4) $\{(5, -4), (7, -9), (0, 9), (-12, 3), (9, 4), (-6, -3), (8, 2)\}$

Domain : _____

5) $\{(17, -9), (10, -5), (8, 3), (8, -5), (13, 8), (6, 2)\}$

Domain : _____

Range : _____

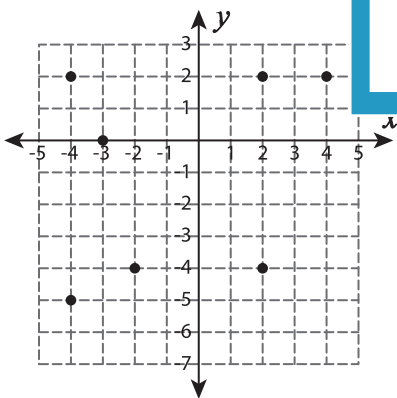
7) $\{(19, 12), (11, 5), (2, 2), (-4, 1), (-6, 5), (1, 3), (-20, 7)\}$

Domain : _____

Range : _____

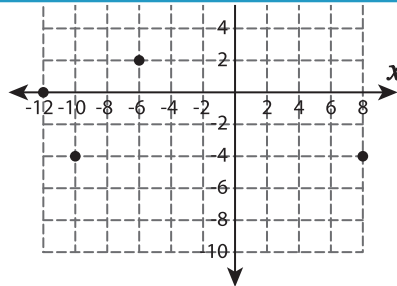
B) Find the domain and range of each relation

9)



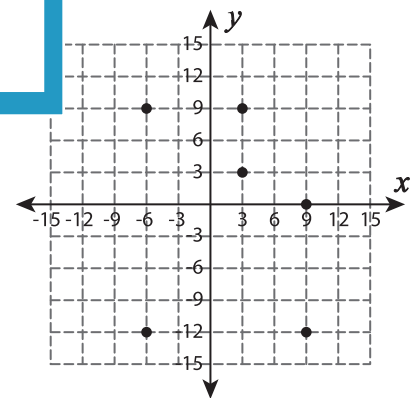
Domain : _____

Range : _____



Domain : _____

Range : _____



Domain : _____

Range : _____

PREVIEW

Gain complete access to the largest collection of worksheets in all subjects!

Members, please log in to download this worksheet.

Not a member? Please sign up to gain complete access.

www.mathworksheets4kids.com

on the graph.