

Name : _____

Box-and-Whisker Plot

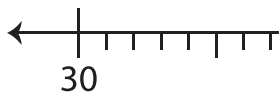
Sheet 2

- 1) The data for the number of research papers published by a scientist every year, from 2004 to 2015 are given below.

32, 67, 64, 57, 56, 62, 39, 33, 51, 70, 55, 49

Make a box-and-whisker plot.

Min: _____, Q_1 : _____, Q_2 : _____, Q_3 : _____, Max: _____



- 2) A hospital conducted a survey of the number of people who visited the hospital across the state.

The data shows the following number of people:

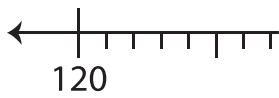
125, 130, 152, 160, 170, 180, 190, 200, 210, 220, 230, 240, 250, 260, 270, 280, 290, 300, 310, 320, 330, 340, 350, 360, 370, 380, 390, 400, 410, 420, 430, 440, 450, 460, 470, 480, 490, 500, 510, 520, 530, 540, 550, 560, 570, 580, 590, 600, 610, 620, 630, 640, 650, 660, 670, 680, 690, 700, 710, 720, 730, 740, 750, 760, 770, 780, 790, 800, 810, 820, 830, 840, 850, 860, 870, 880, 890, 900, 910, 920, 930, 940, 950, 960, 970, 980, 990, 1000

Make a box-and-whisker plot.

Min: _____, Q_1 : _____, Q_2 : _____, Q_3 : _____, Max: _____

aces across the state.

_____, Max: _____



- 3) John's desktop computer has a hard drive with a capacity of 100 GB. The sizes of eleven software files on the hard drive are given below.

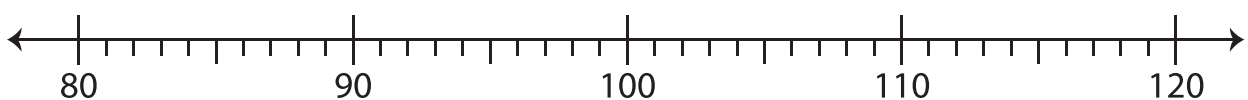
The sizes of the files are:

96, 88, 113, 82, 95, 99, 108, 119, 84, 94, 105

Make a box-and-whisker plot.

Min: _____, Q_1 : _____, Q_2 : _____, Q_3 : _____, Max: _____

ata (in MB) of the



PREVIEW

Gain complete access to the largest collection of worksheets in all subjects!

Members, please log in to download this worksheet.

Not a member? Please sign up to gain complete access.

www.mathworksheets4kids.com