

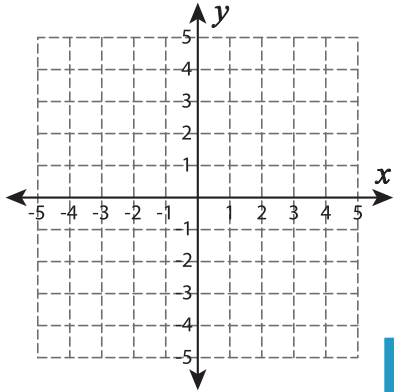
Name : _____

Find the Slope

Sheet 3

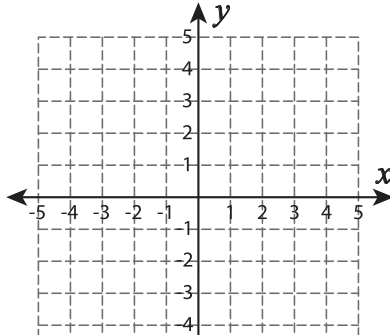
Graph a line through the given pair of points. Find the slope.

1) $(4, 3)$ and $(-5, 1)$

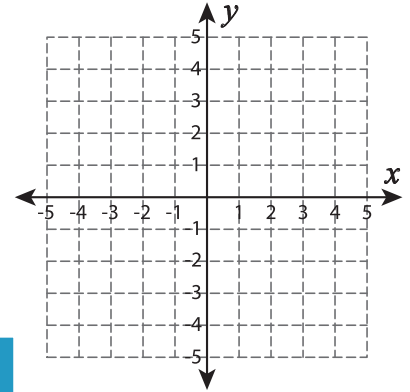


Slope = _____

2) x-intercept=2, y-intercept=-4

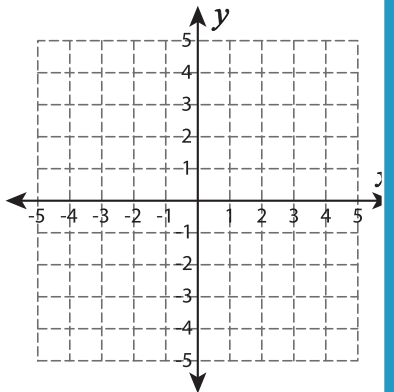


3) $(1, 1)$ and $(-1, -5)$



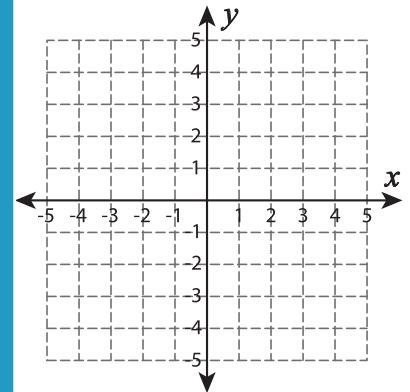
Slope = _____

4) $(-3, 3)$ and $(4, -2)$



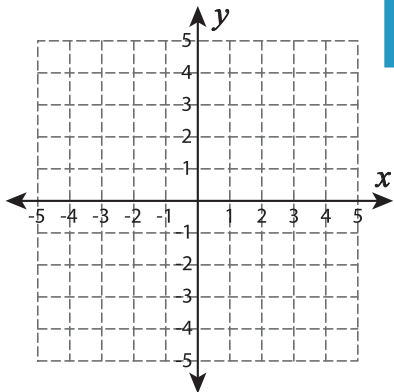
Slope = _____

x-intercept=5, y-intercept=1



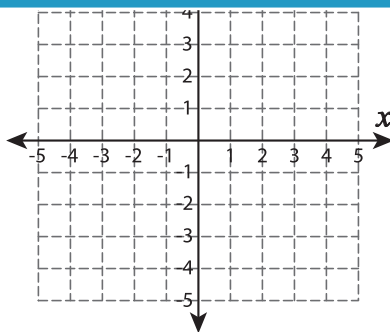
Slope = _____

7) x-intercept=-5, y-intercept=3



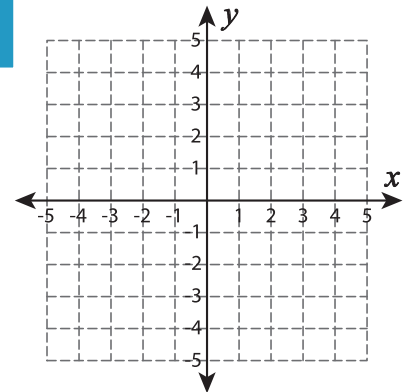
Slope = _____

x-intercept=3, y-intercept=-2



Slope = _____

$(-4, -2)$ and $(3, 2)$



Slope = _____

PREVIEW

Gain complete access to the largest collection of worksheets in all subjects!

Members, please log in to download this worksheet.

Not a member? Please sign up to gain complete access.

www.mathworksheets4kids.com